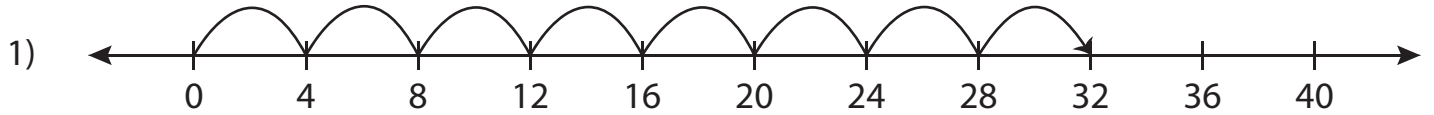


## Number Line Multiplication - MCQ

Sheet 2

Identify the correct multiplication sentence for each number line.



a)  $8 \times 6 = 48$

b)  $7 \times 4 = 28$

c)  $2 \times 16 = 32$

d)  $8 \times 4 = 32$



a)  $2 \times 2 = 4$

d)  $2 \times 4 = 8$



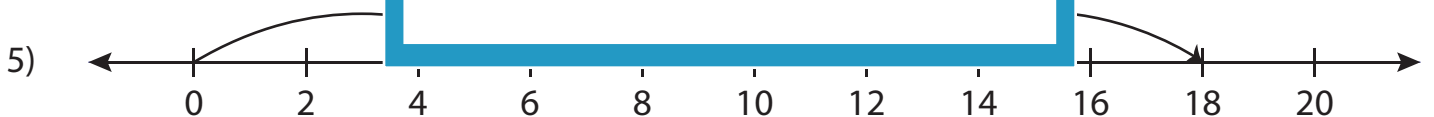
a)  $9 \times 9 = 81$

d)  $21 \times 3 = 63$



a)  $9 \times 1 = 9$

d)  $5 \times 3 = 15$

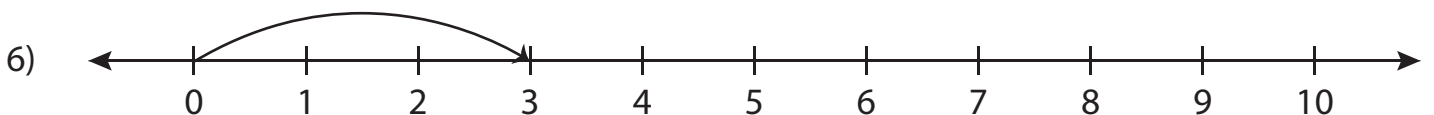


a)  $3 \times 6 = 18$

b)  $9 \times 2 = 18$

c)  $3 \times 9 = 27$

d)  $2 \times 6 = 12$



a)  $3 \times 3 = 9$

b)  $8 \times 1 = 8$

c)  $1 \times 6 = 6$

d)  $1 \times 3 = 3$

# PREVIEW

Gain complete access to the largest collection of worksheets in all subjects!

Members, please log in to download this worksheet.

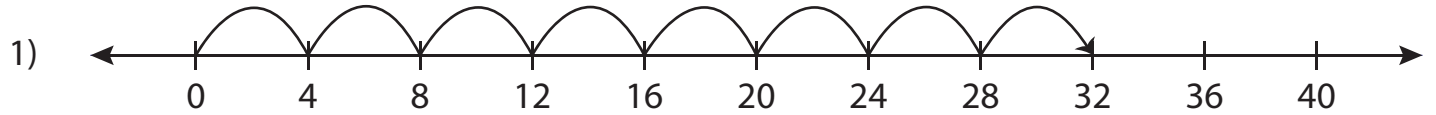
Not a member? Please sign up to gain complete access.

www.mathworksheets4kids.com

**Answer key****Number Line Multiplication - MCQ**

Sheet 2

Identify the correct multiplication sentence for each number line.



- a)  $8 \times 6 = 48$       b)  $7 \times 4 = 28$       c)  $2 \times 16 = 32$        d)  $8 \times 4 = 32$



a)  $2 \times 2 = 4$

**PREVIEW**

Gain complete access to the largest collection of worksheets in all subjects!

Members, please log in to download this worksheet.

Not a member? Please sign up to gain complete access.

[www.mathworksheets4kids.com](http://www.mathworksheets4kids.com)

d)  $2 \times 4 = 8$



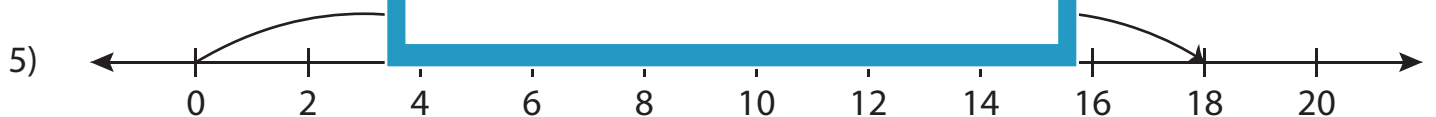
a)  $9 \times 9 = 81$

d)  $21 \times 3 = 63$



a)  $9 \times 1 = 9$

d)  $5 \times 3 = 15$

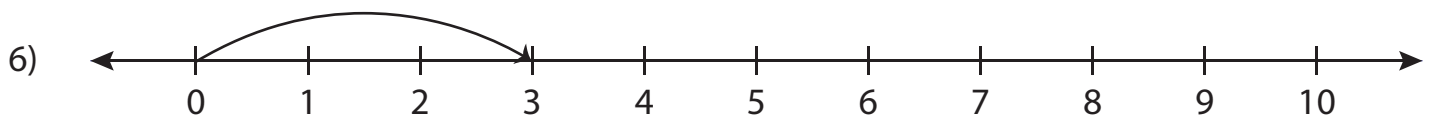


a)  $3 \times 6 = 18$

b)  $9 \times 2 = 18$

c)  $3 \times 9 = 27$

d)  $2 \times 6 = 12$



a)  $3 \times 3 = 9$

b)  $8 \times 1 = 8$

c)  $1 \times 6 = 6$

d)  $1 \times 3 = 3$