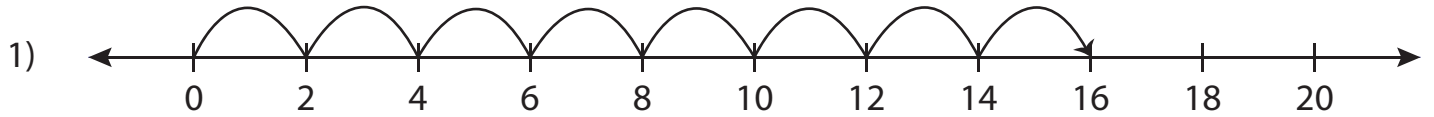


## Number Line Multiplication - MCQ

Sheet 4

Identify the correct multiplication sentence for each number line.



a)  $8 \times 2 = 16$

b)  $8 \times 4 = 32$

c)  $4 \times 4 = 16$

d)  $4 \times 5 = 20$



a)  $3 \times 27 = 81$

d)  $2 \times 9 = 18$



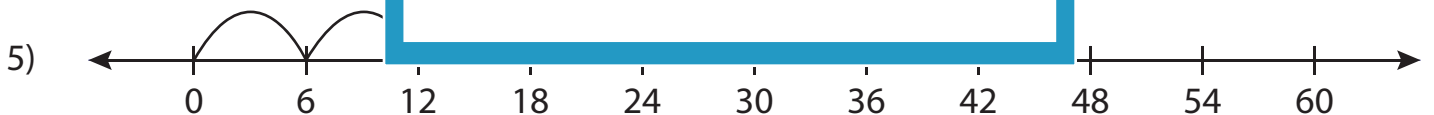
a)  $6 \times 3 = 18$

d)  $2 \times 3 = 6$



a)  $2 \times 9 = 18$

d)  $2 \times 7 = 14$

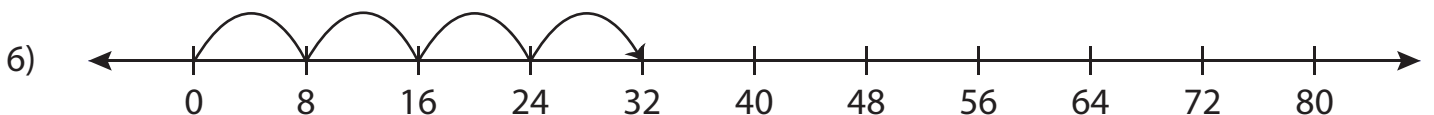


a)  $3 \times 14 = 42$

b)  $21 \times 2 = 42$

c)  $7 \times 6 = 42$

d)  $7 \times 4 = 28$



a)  $3 \times 8 = 24$

b)  $4 \times 8 = 32$

c)  $16 \times 2 = 32$

d)  $4 \times 2 = 8$

# PREVIEW

Gain complete access to the largest  
collection of worksheets in all subjects!

Members, please  
log in to  
download this  
worksheet.

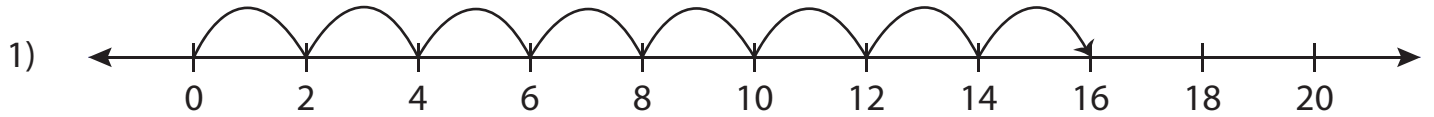
Not a member?  
Please sign up to  
gain complete  
access.

www.mathworksheets4kids.com

**Answer key****Number Line Multiplication - MCQ**

Sheet 4

Identify the correct multiplication sentence for each number line.



a)   $8 \times 2 = 16$

b)  $8 \times 4 = 32$

c)  $4 \times 4 = 16$

d)  $4 \times 5 = 20$



a)  $3 \times 27 = 81$

d)  $2 \times 9 = 18$



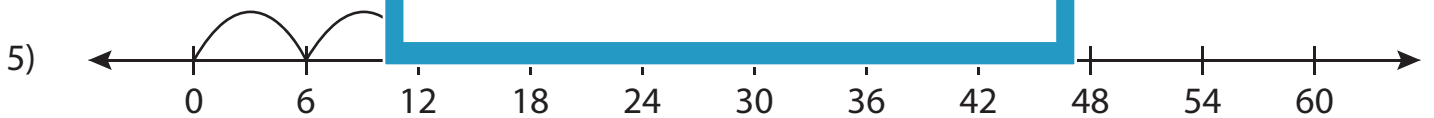
a)  $6 \times 3 = 18$

d)   $2 \times 3 = 6$



a)  $2 \times 9 = 18$

d)   $2 \times 7 = 14$

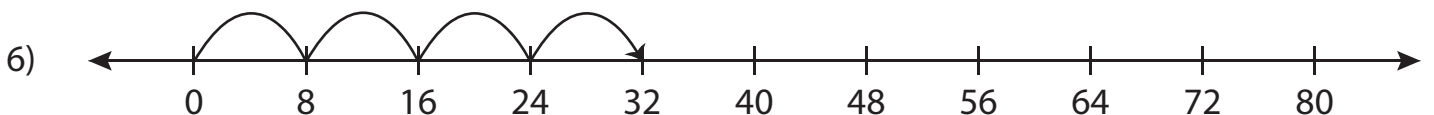


a)  $3 \times 14 = 42$

b)  $21 \times 2 = 42$

c)   $7 \times 6 = 42$

d)  $7 \times 4 = 28$



a)  $3 \times 8 = 24$

b)   $4 \times 8 = 32$

c)  $16 \times 2 = 32$

d)  $4 \times 2 = 8$

**PREVIEW**

Gain complete access to the largest collection of worksheets in all subjects!

Members, please log in to download this worksheet.

Not a member? Please sign up to gain complete access.

[www.mathworksheets4kids.com](http://www.mathworksheets4kids.com)