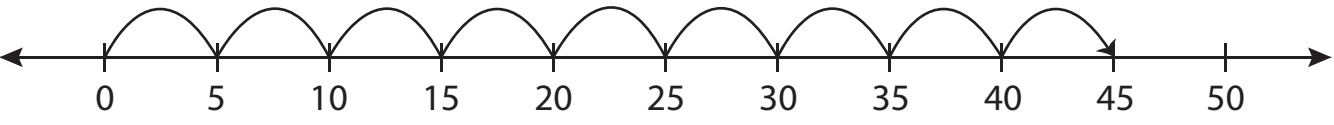
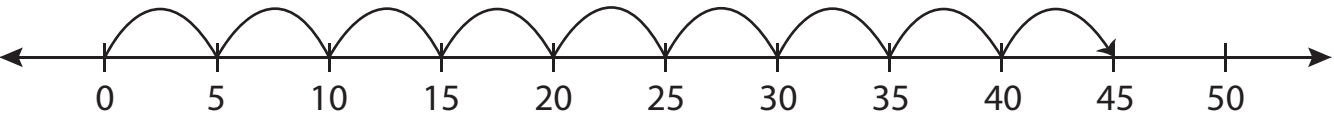








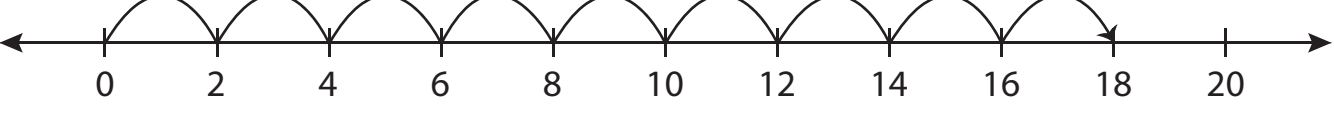
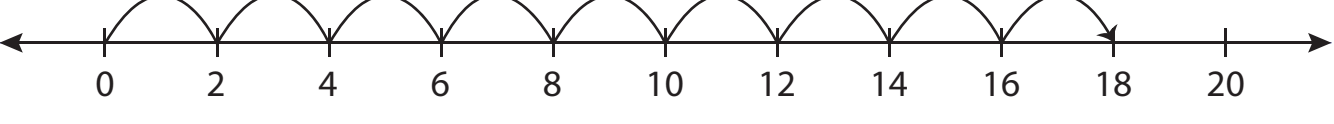


Number Line Multiplication - MCQ

Sheet 5

Identify the correct multiplication sentence for each number line.

- 1)  1) 
- a) $9 \times 5 = 45$ b) $3 \times 15 = 45$ c) $9 \times 4 = 36$ d) $10 \times 5 = 50$
- 2)  2) 
- a) $8 \times 2 = 16$ d) $4 \times 4 = 16$
- 3)  3) 
- a) $12 \times 4 = 48$ d) $2 \times 24 = 48$
- 4)  4) 
- a) $7 \times 2 = 14$ d) $9 \times 2 = 18$
- 5)  5) 
- a) $9 \times 2 = 18$ b) $2 \times 5 = 10$ c) $10 \times 2 = 20$ d) $10 \times 1 = 10$
- 6)  6) 
- a) $3 \times 6 = 18$ b) $8 \times 2 = 16$ c) $2 \times 6 = 12$ d) $9 \times 2 = 18$

PREVIEW

Gain complete access to the largest
collection of worksheets in all subjects!

Members, please
log in to
download this
worksheet.

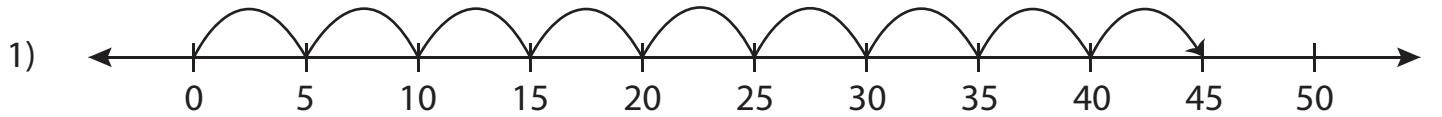
Not a member?
Please sign up to
gain complete
access.

www.mathworksheets4kids.com

Answer key**Number Line Multiplication - MCQ**

Sheet 5

Identify the correct multiplication sentence for each number line.



a) $9 \times 5 = 45$

b) $3 \times 15 = 45$

c) $9 \times 4 = 36$

d) $10 \times 5 = 50$



a) $8 \times 2 = 16$

PREVIEW

d) $4 \times 4 = 16$



a) $12 \times 4 = 48$

Gain complete access to the largest collection of worksheets in all subjects!

d) $2 \times 24 = 48$

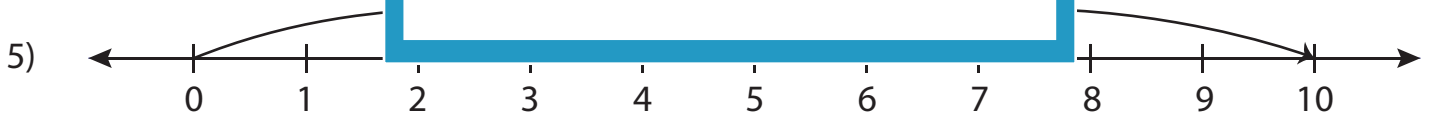


a) $7 \times 2 = 14$

Members, please log in to download this worksheet.

Not a member? Please sign up to gain complete access.

d) $9 \times 2 = 18$

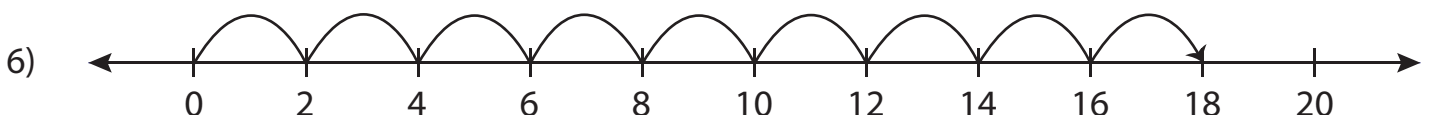
www.mathworksheets4kids.com

a) $9 \times 2 = 18$

b) $2 \times 5 = 10$

c) $10 \times 2 = 20$

d) $10 \times 1 = 10$



a) $3 \times 6 = 18$

b) $8 \times 2 = 16$

c) $2 \times 6 = 12$

d) $9 \times 2 = 18$