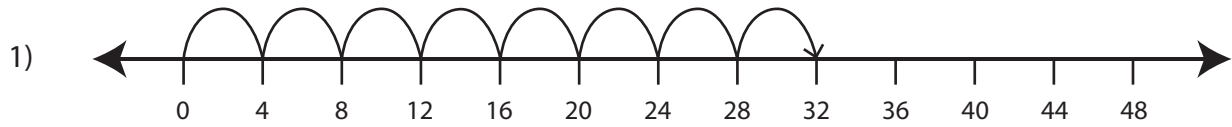



## Multiplication Sentence - Missing Numbers

T2S3

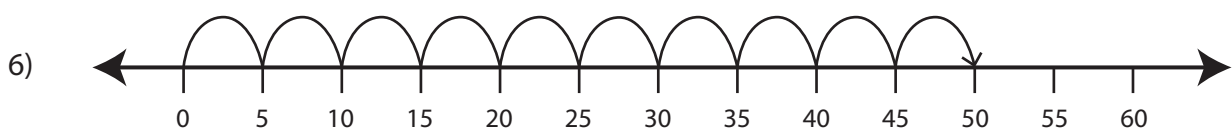
Complete the multiplication sentence that describes each model.



$$\square \times 4 = 32$$



$$\square \times 9 = 72$$



$$10 \times \square = 50$$

**PREVIEW**

Gain complete access to the largest  
collection of worksheets in all subjects!

Members, please  
log in to  
download this  
worksheet.

Not a member?  
Please sign up to  
gain complete  
access.

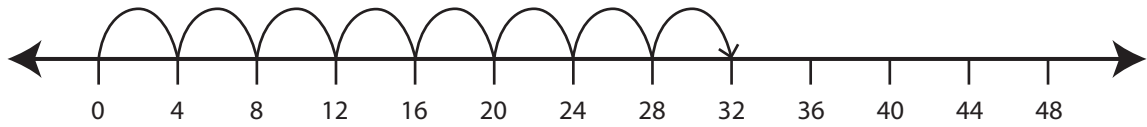
[www.mathworksheets4kids.com](http://www.mathworksheets4kids.com)

## Multiplication Sentence - Missing Numbers

T2S3

Complete the multiplication sentence that describes each model.

1)



$$\boxed{8} \times 4 = 32$$

2)



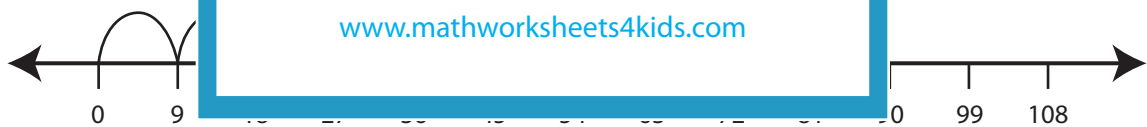
3)



4)

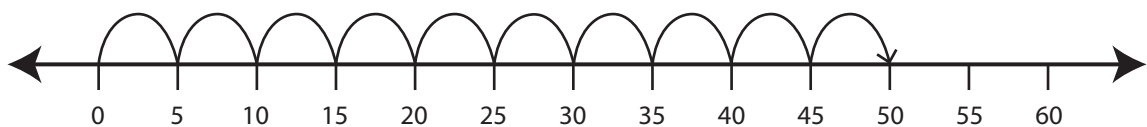


5)



$$\boxed{8} \times 9 = 72$$

6)



$$10 \times \boxed{5} = 50$$

# PREVIEW

Gain complete access to the largest  
collection of worksheets in all subjects!

Members, please  
log in to  
download this  
worksheet.

Not a member?  
Please sign up to  
gain complete  
access.

[www.mathworksheets4kids.com](http://www.mathworksheets4kids.com)