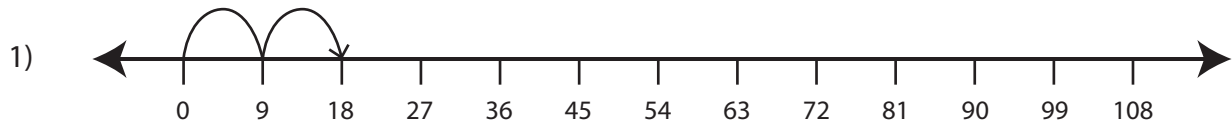


Multiplication Sentence - Missing Numbers

T2S4

Complete the multiplication sentence that describes each model.



$$2 \times \square = 18$$



$$3 \times \square = 18$$



$$\square \times 4 = 20$$

PREVIEW

Gain complete access to the largest collection of worksheets in all subjects!

Members, please log in to download this worksheet.

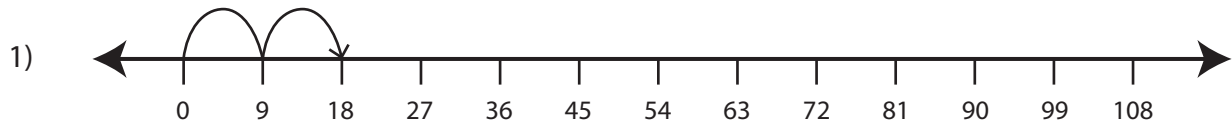
Not a member? Please sign up to gain complete access.

www.mathworksheets4kids.com

Multiplication Sentence - Missing Numbers

T254

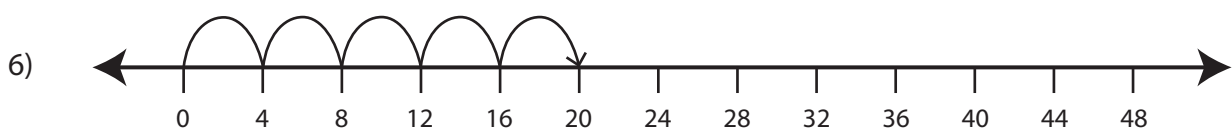
Complete the multiplication sentence that describes each model.



$$2 \times \boxed{9} = 18$$



$$3 \times \boxed{6} = 18$$



$$\boxed{5} \times 4 = 20$$

PREVIEW

Gain complete access to the largest
collection of worksheets in all subjects!

Members, please
log in to
download this
worksheet.

Not a member?
Please sign up to
gain complete
access.

www.mathworksheets4kids.com