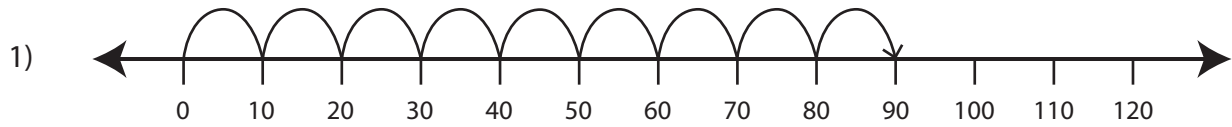


Multiplication Sentence - Missing Numbers

T2S5

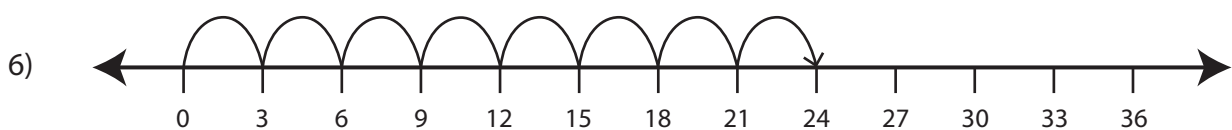
Complete the multiplication sentence that describes each model.



$$\square \times 10 = 90$$



$$\square \times 5 = 45$$



$$8 \times \square = 24$$

PREVIEW

Gain complete access to the largest collection of worksheets in all subjects!

Members, please log in to download this worksheet.

Not a member? Please sign up to gain complete access.

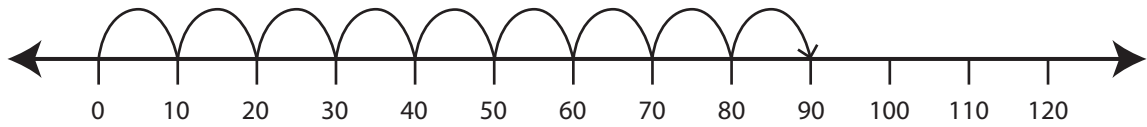
www.mathworksheets4kids.com

Multiplication Sentence - Missing Numbers

T2S5

Complete the multiplication sentence that describes each model.

1)



$$\boxed{9} \times 10 = 90$$

2)



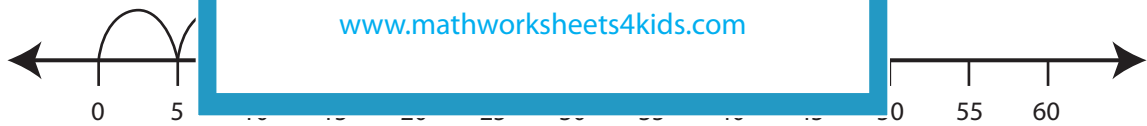
3)



4)

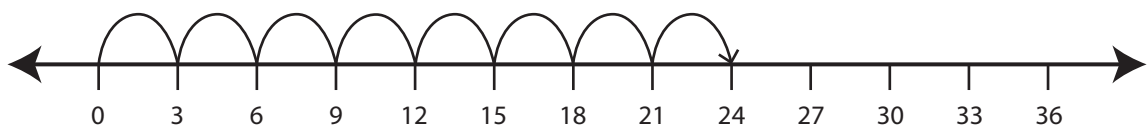


5)



$$\boxed{9} \times 5 = 45$$

6)



$$8 \times \boxed{3} = 24$$

PREVIEW

Gain complete access to the largest
collection of worksheets in all subjects!

Members, please
log in to
download this
worksheet.

Not a member?
Please sign up to
gain complete
access.

www.mathworksheets4kids.com