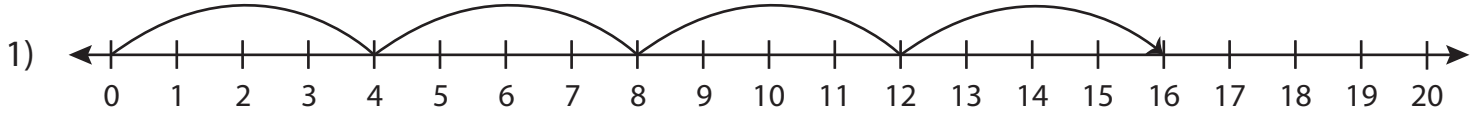


Multiplication Sentence

T1S4

Write the multiplication sentence that describes each model.



$$\underline{\quad} \times \underline{\quad} = \underline{\quad}$$



$$\underline{\quad} \times \underline{\quad} = \underline{\quad}$$



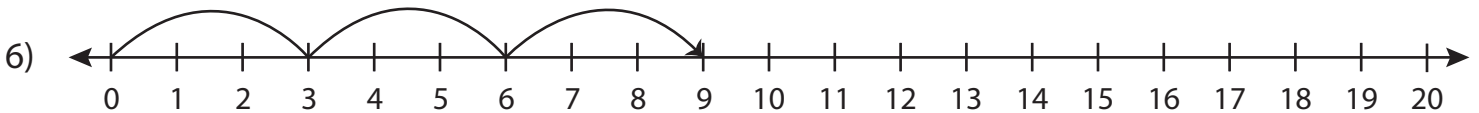
$$\underline{\quad} \times \underline{\quad} = \underline{\quad}$$



$$\underline{\quad} \times \underline{\quad} = \underline{\quad}$$



$$\underline{\quad} \times \underline{\quad} = \underline{\quad}$$



$$\underline{\quad} \times \underline{\quad} = \underline{\quad}$$

PREVIEW

Gain complete access to the largest collection of worksheets in all subjects!

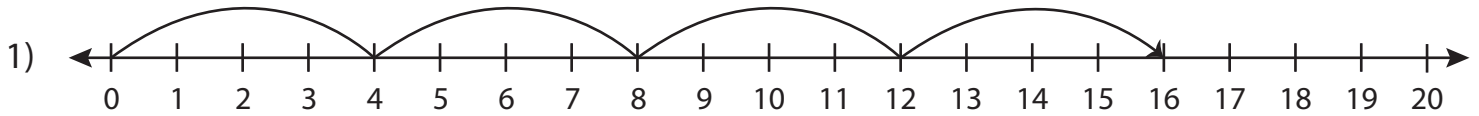
Members, please log in to download this worksheet.

Not a member? Please sign up to gain complete access.

www.mathworksheets4kids.com

Multiplication Sentence

Write the multiplication sentence that describes each model.



$$\underline{4} \times \underline{4} = \underline{16}$$



$$\underline{8} \times \underline{2} = \underline{16}$$



$$\underline{3} \times \underline{6} = \underline{18}$$



$$\underline{5} \times \underline{4} = \underline{20}$$



$$\underline{2} \times \underline{7} = \underline{14}$$



$$\underline{3} \times \underline{3} = \underline{9}$$

PREVIEW

Gain complete access to the largest collection of worksheets in all subjects!

Members, please log in to download this worksheet.

Not a member? Please sign up to gain complete access.

www.mathworksheets4kids.com