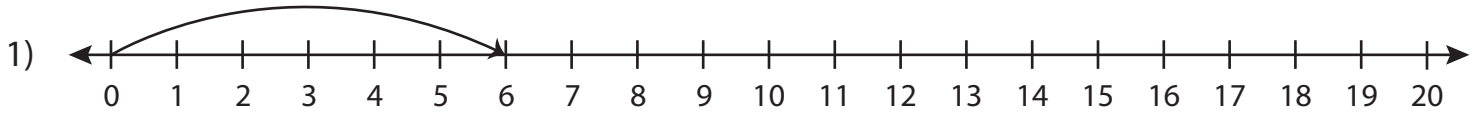


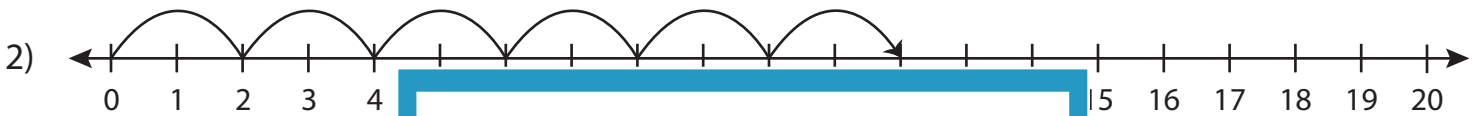
Multiplication Sentence

T1S5

Write the multiplication sentence that describes each model.



$$\underline{\quad} \times \underline{\quad} = \underline{\quad}$$



$$\underline{\quad} \times \underline{\quad} = \underline{\quad}$$



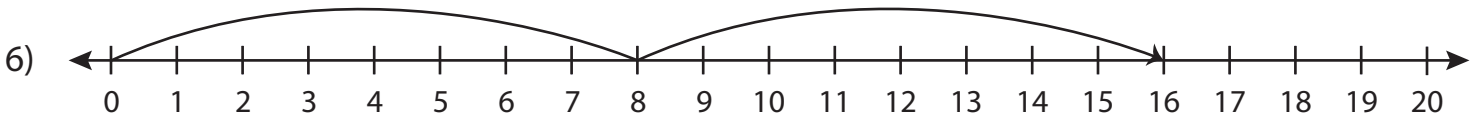
$$\underline{\quad} \times \underline{\quad} = \underline{\quad}$$



$$\underline{\quad} \times \underline{\quad} = \underline{\quad}$$



$$\underline{\quad} \times \underline{\quad} = \underline{\quad}$$



$$\underline{\quad} \times \underline{\quad} = \underline{\quad}$$

PREVIEW

Gain complete access to the largest
collection of worksheets in all subjects!

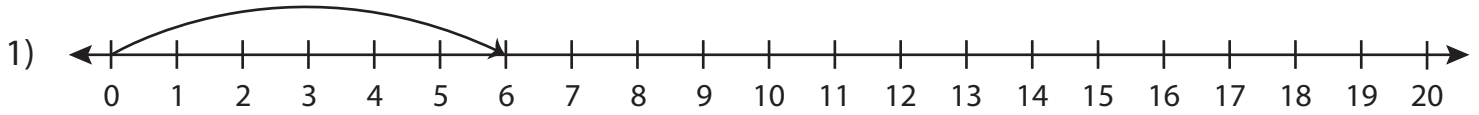
Members, please
log in to
download this
worksheet.

Not a member?
Please sign up to
gain complete
access.

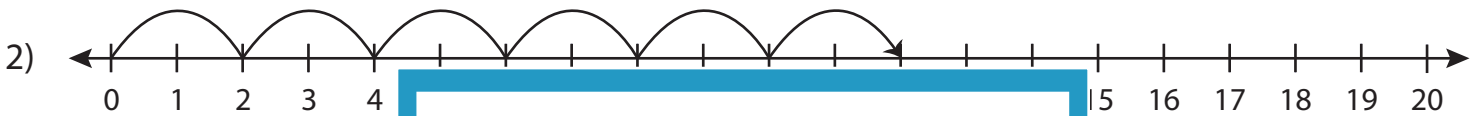
www.mathworksheets4kids.com

Multiplication Sentence

Write the multiplication sentence that describes each model.



$$\underline{1} \times \underline{6} = \underline{6}$$



$$\underline{6} \times \underline{2} = \underline{12}$$



$$\underline{2} \times \underline{4} = \underline{8}$$



$$\underline{1} \times \underline{4} = \underline{4}$$



$$\underline{9} \times \underline{1} = \underline{9}$$



$$\underline{2} \times \underline{8} = \underline{16}$$

PREVIEW

Gain complete access to the largest collection of worksheets in all subjects!

Members, please log in to download this worksheet.

Not a member? Please sign up to gain complete access.

www.mathworksheets4kids.com