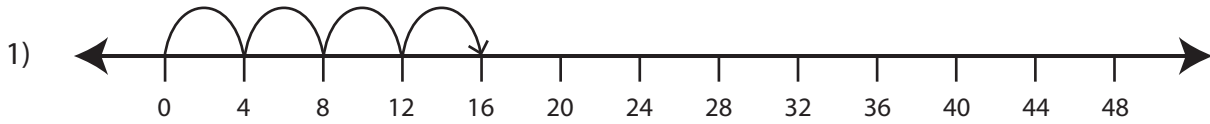


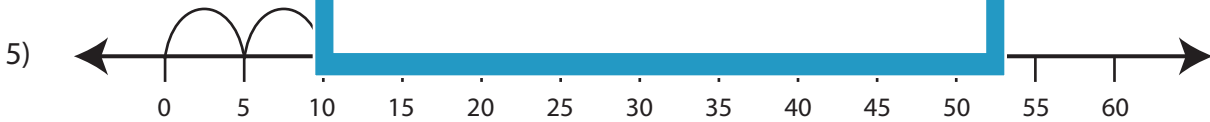
Multiplication Sentence

T2S2

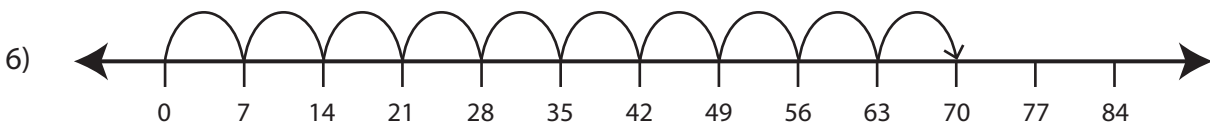
Write the multiplication sentence that describes each model.



$$\underline{\quad} \times \underline{\quad} = \underline{\quad}$$



$$\underline{\quad} \times \underline{\quad} = \underline{\quad}$$



$$\underline{\quad} \times \underline{\quad} = \underline{\quad}$$

PREVIEW

Gain complete access to the largest
collection of worksheets in all subjects!

Members, please
log in to
download this
worksheet.

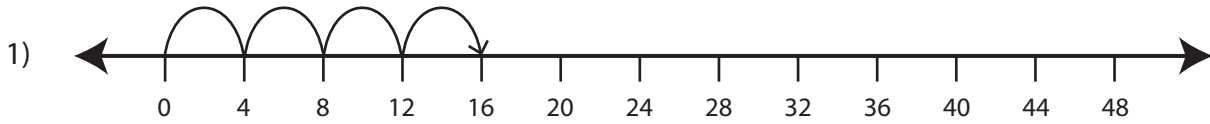
Not a member?
Please sign up to
gain complete
access.

www.mathworksheets4kids.com

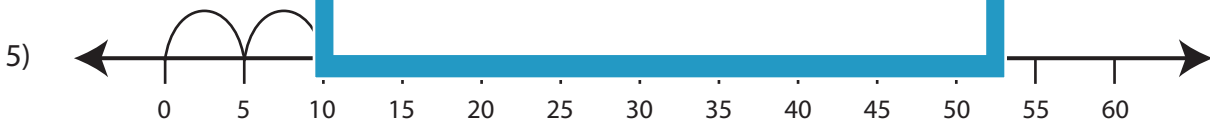
Multiplication Sentence

T2S2

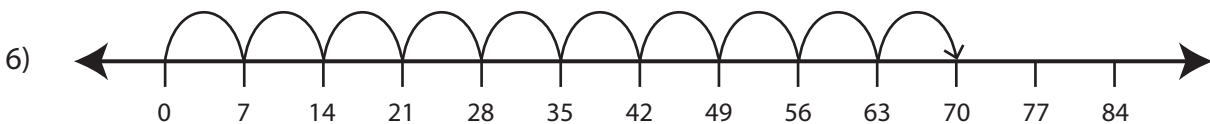
Write the multiplication sentence that describes each model.



$$\underline{4} \times \underline{4} = \underline{16}$$



$$\underline{9} \times \underline{5} = \underline{45}$$



$$\underline{10} \times \underline{7} = \underline{70}$$

PREVIEW

Gain complete access to the largest collection of worksheets in all subjects!

Members, please log in to download this worksheet.

Not a member? Please sign up to gain complete access.

www.mathworksheets4kids.com