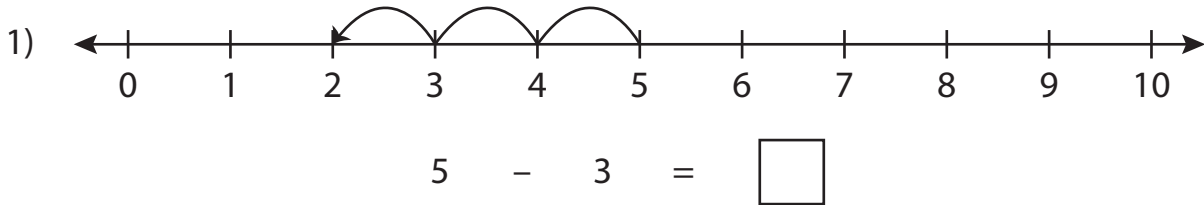


Number Line Subtraction

0-10: S1

Read each number line and solve the problem.



$$10 - 1 = \square$$



$$7 - 5 = \square$$

PREVIEW

Gain complete access to the largest collection of worksheets in all subjects!

Members, please log in to download this worksheet.

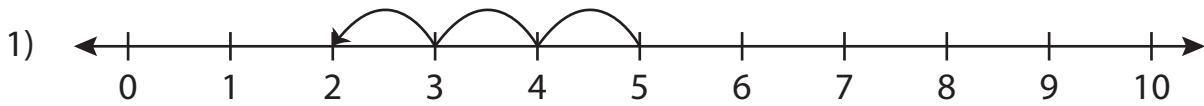
Not a member? Please sign up to gain complete access.

www.mathworksheets4kids.com

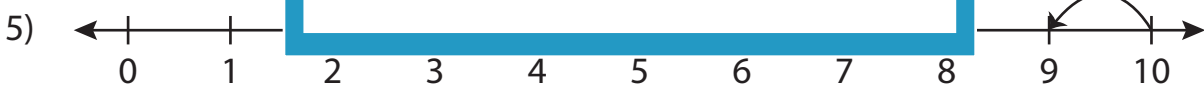
Number Line Subtraction

0-10: S1

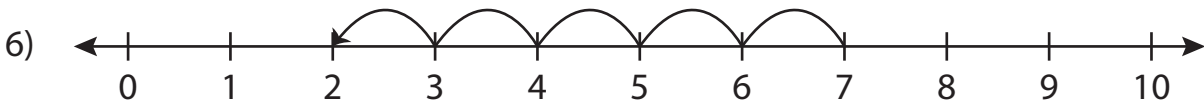
Read each number line and solve the problem.



$$5 - 3 = \boxed{2}$$



$$10 - 1 = \boxed{9}$$



$$7 - 5 = \boxed{2}$$

PREVIEW

Gain complete access to the largest collection of worksheets in all subjects!

Members, please log in to download this worksheet.

Not a member? Please sign up to gain complete access.

www.mathworksheets4kids.com