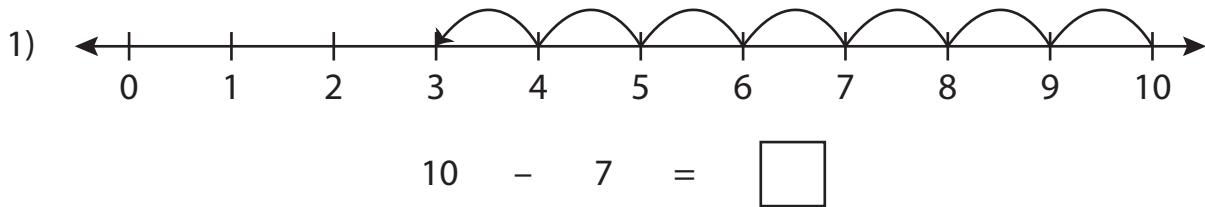


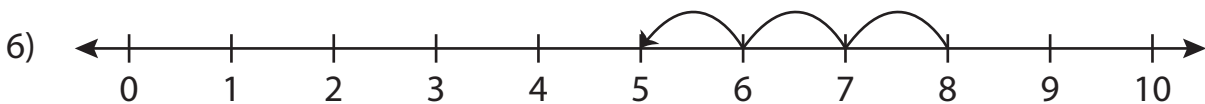
Number Line Subtraction

0-10: S2

Read each number line and solve the problem.



$$6 - 2 = \square$$



$$8 - 3 = \square$$

PREVIEW

Gain complete access to the largest collection of worksheets in all subjects!

Members, please log in to download this worksheet.

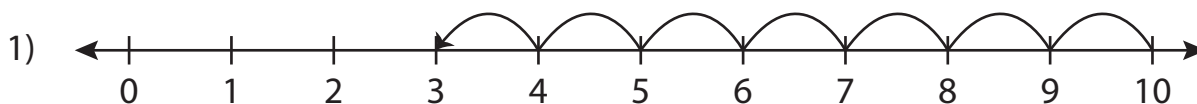
Not a member? Please sign up to gain complete access.

www.mathworksheets4kids.com

Number Line Subtraction

0-10: S2

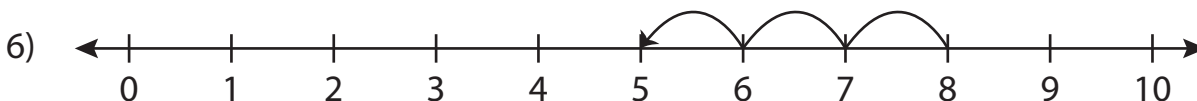
Read each number line and solve the problem.



$$10 - 7 = \boxed{3}$$



$$6 - 2 = \boxed{4}$$



$$8 - 3 = \boxed{5}$$

PREVIEW

Gain complete access to the largest collection of worksheets in all subjects!

Members, please log in to download this worksheet.

Not a member? Please sign up to gain complete access.

www.mathworksheets4kids.com