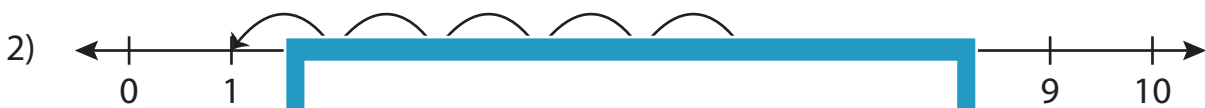
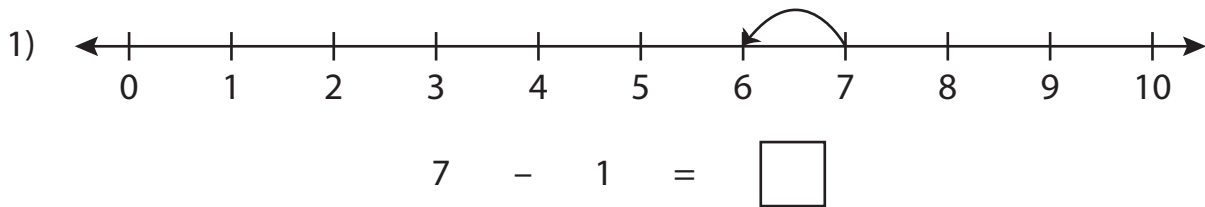


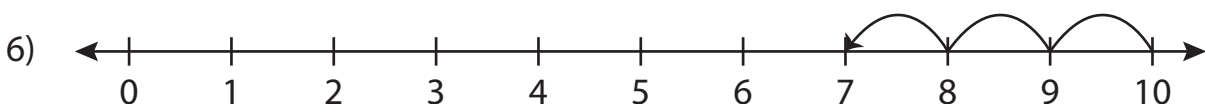
Number Line Subtraction

0-10: S3

Read each number line and solve the problem.



$8 - 6 = \square$



$10 - 3 = \square$

PREVIEW

Gain complete access to the largest collection of worksheets in all subjects!

Members, please log in to download this worksheet.

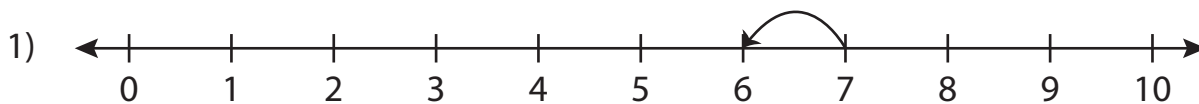
Not a member? Please sign up to gain complete access.

www.mathworksheets4kids.com

Number Line Subtraction

0-10: S3

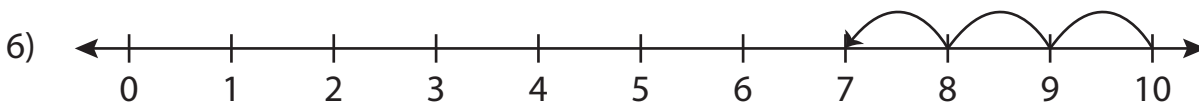
Read each number line and solve the problem.



$$7 - 1 = \boxed{6}$$



$$8 - 6 = \boxed{2}$$



$$10 - 3 = \boxed{7}$$

PREVIEW

Gain complete access to the largest collection of worksheets in all subjects!

Members, please log in to download this worksheet.

Not a member? Please sign up to gain complete access.

www.mathworksheets4kids.com