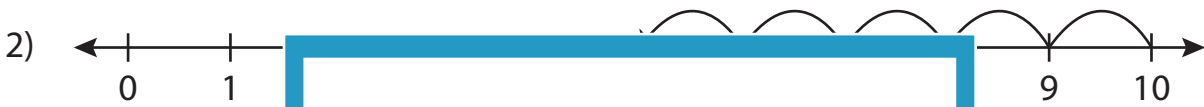
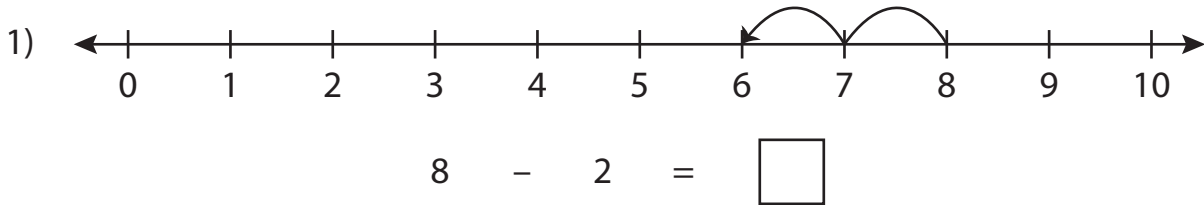


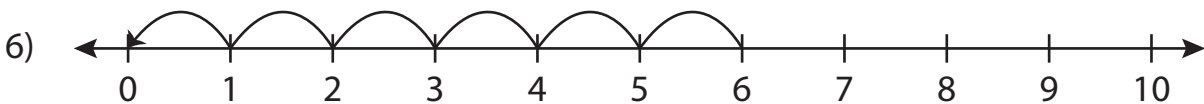
Number Line Subtraction

0-10: S4

Read each number line and solve the problem.



$$9 - 7 = \square$$



$$6 - 6 = \square$$

PREVIEW

Gain complete access to the largest
collection of worksheets in all subjects!

Members, please
log in to
download this
worksheet.

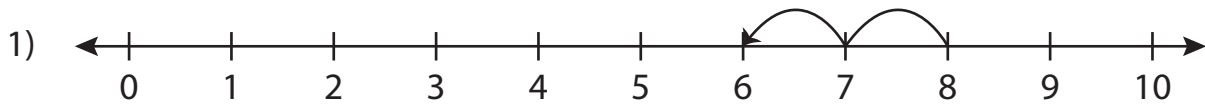
Not a member?
Please sign up to
gain complete
access.

www.mathworksheets4kids.com

Number Line Subtraction

0-10: S4

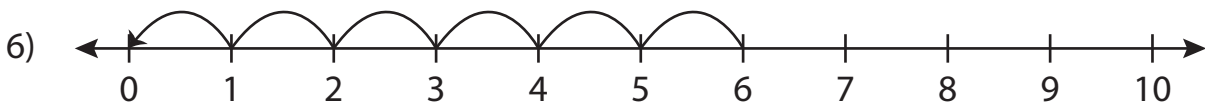
Read each number line and solve the problem.



$$8 - 2 = \boxed{6}$$



$$9 - 7 = \boxed{2}$$



$$6 - 6 = \boxed{0}$$

PREVIEW

Gain complete access to the largest
collection of worksheets in all subjects!

Members, please
log in to
download this
worksheet.

Not a member?
Please sign up to
gain complete
access.

www.mathworksheets4kids.com