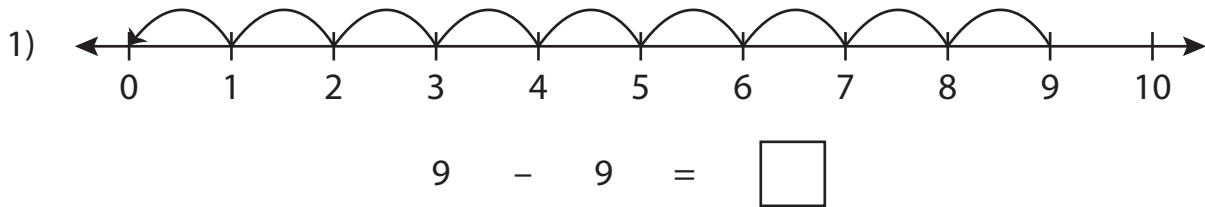


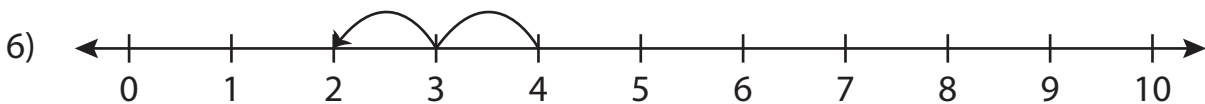
Number Line Subtraction

0-10: S5

Read each number line and solve the problem.



$$7 - 4 = \square$$



$$4 - 2 = \square$$

PREVIEW

Gain complete access to the largest collection of worksheets in all subjects!

Members, please log in to download this worksheet.

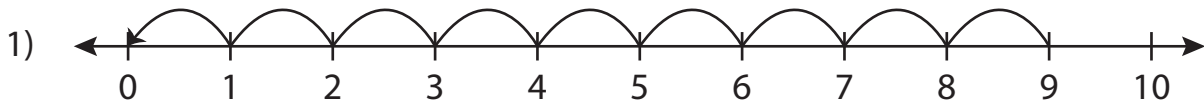
Not a member? Please sign up to gain complete access.

www.mathworksheets4kids.com

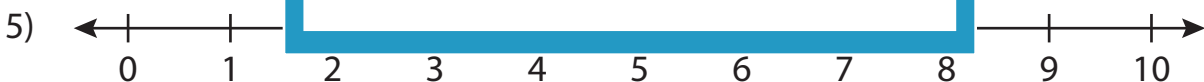
Number Line Subtraction

0-10: S5

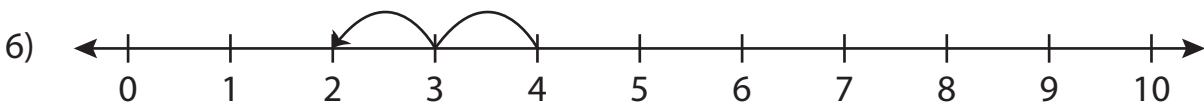
Read each number line and solve the problem.



$$9 - 9 = \boxed{0}$$



$$7 - 4 = \boxed{3}$$



$$4 - 2 = \boxed{2}$$

PREVIEW

Gain complete access to the largest
collection of worksheets in all subjects!

Members, please
log in to
download this
worksheet.

Not a member?
Please sign up to
gain complete
access.

www.mathworksheets4kids.com