

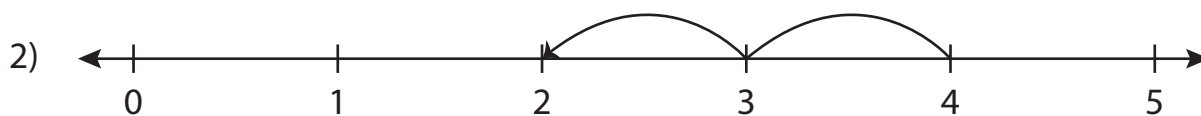
Number Line Subtraction

0-5: S1

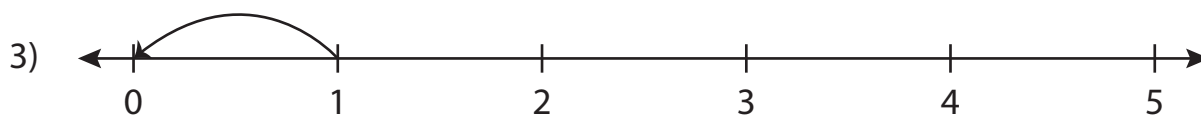
Read each number line and solve the problem.



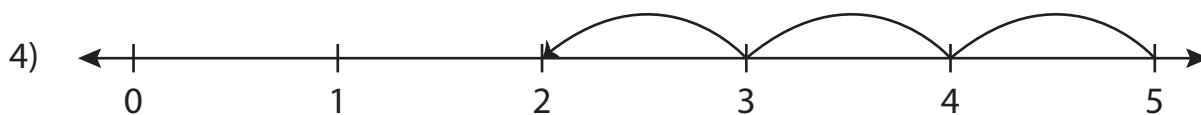
$$5 - 4 = \square$$



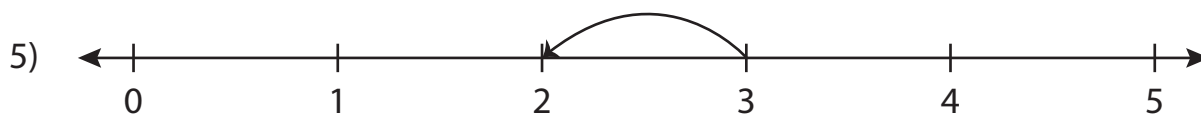
$$4 - 2 = \square$$



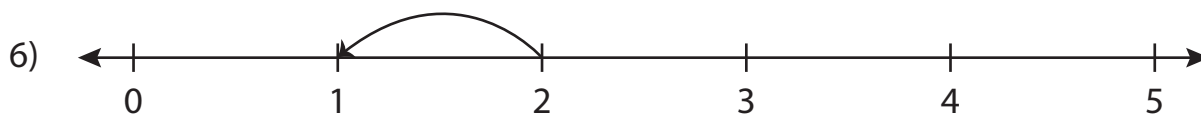
$$1 - 1 = \square$$



$$5 - 3 = \square$$



$$3 - 1 = \square$$

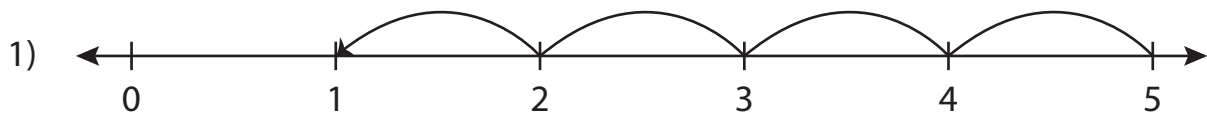


$$2 - 1 = \square$$

Number Line Subtraction

0-5: S1

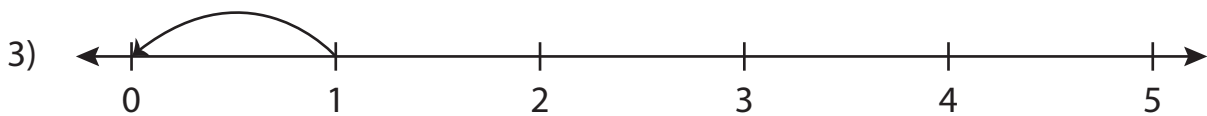
Read each number line and solve the problem.



$$5 - 4 = \boxed{1}$$



$$4 - 2 = \boxed{2}$$



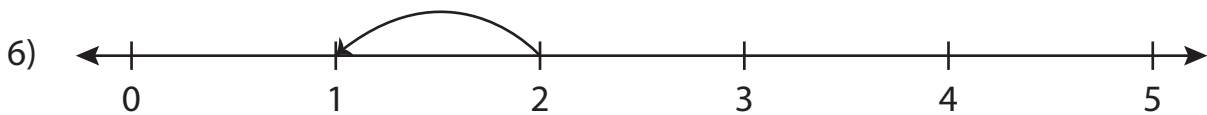
$$1 - 1 = \boxed{0}$$



$$5 - 3 = \boxed{2}$$



$$3 - 1 = \boxed{2}$$



$$2 - 1 = \boxed{1}$$