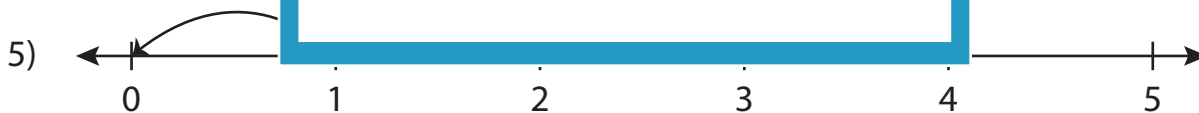
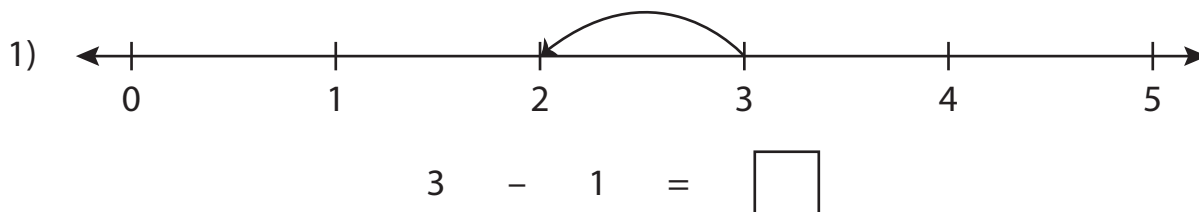


# Number Line Subtraction

0-5: S4

Read each number line and solve the problem.



$$1 - 1 = \square$$



$$3 - 2 = \square$$

**PREVIEW**

Gain complete access to the largest collection of worksheets in all subjects!

Members, please log in to download this worksheet.

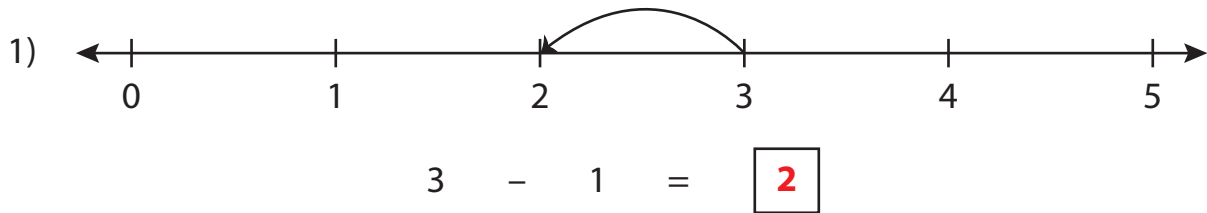
Not a member? Please sign up to gain complete access.

[www.mathworksheets4kids.com](http://www.mathworksheets4kids.com)

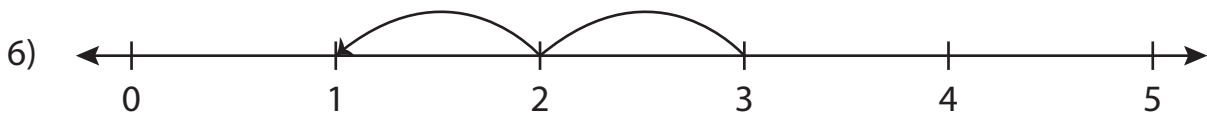
# Number Line Subtraction

0-5: S4

Read each number line and solve the problem.



$$1 - 1 = \boxed{0}$$



$$3 - 2 = \boxed{1}$$

**PREVIEW**

Gain complete access to the largest collection of worksheets in all subjects!

Members, please log in to download this worksheet.

Not a member? Please sign up to gain complete access.

[www.mathworksheets4kids.com](http://www.mathworksheets4kids.com)