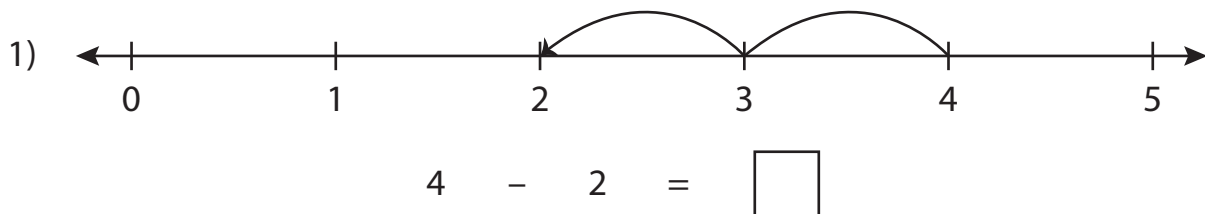



# Number Line Subtraction

0-5: S5

Read each number line and solve the problem.



$$3 - 3 = \square$$



$$5 - 2 = \square$$

## PREVIEW

Gain complete access to the largest collection of worksheets in all subjects!

Members, please log in to download this worksheet.

Not a member? Please sign up to gain complete access.

www.mathworksheets4kids.com

# Number Line Subtraction

0-5: S5


Read each number line and solve the problem.



$$4 - 2 = \boxed{2}$$



$$3 - 3 = \boxed{0}$$



$$5 - 2 = \boxed{3}$$

# PREVIEW

Gain complete access to the largest collection of worksheets in all subjects!

Members, please log in to download this worksheet.

Not a member? Please sign up to gain complete access.

[www.mathworksheets4kids.com](http://www.mathworksheets4kids.com)