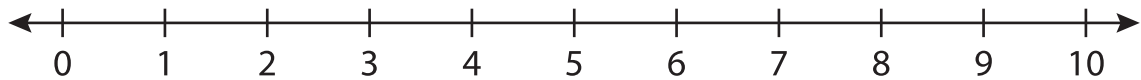


Number Line Subtraction

0-10: S1

Indicate hops on each number line and complete the subtraction sentences.

1) $7 - 4 =$ _____



2) $9 - 2 =$ _____



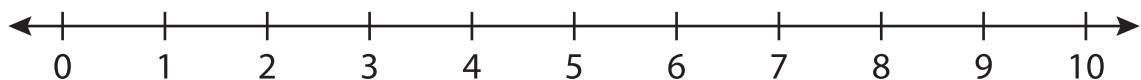
3) $10 - 9 =$ _____



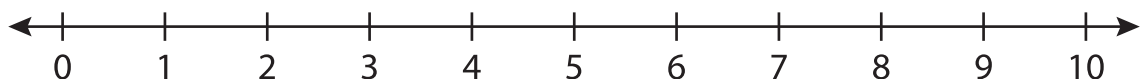
4) $3 - 1 =$ _____



5) $8 - 3 =$ _____



6) $6 - 6 =$ _____

**PREVIEW**Gain complete access to the largest
collection of worksheets in all subjects!Members, please
log in to
download this
worksheet.Not a member?
Please sign up to
gain complete
access.www.mathworksheets4kids.com