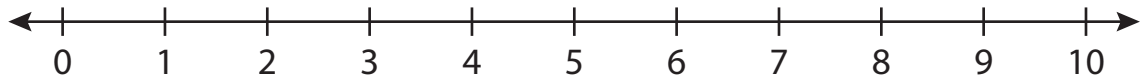


**Number Line Subtraction**

0-10: S3

Indicate hops on each number line and complete the subtraction sentences.

1)  $9 - 8 = \underline{\quad}$



2)  $1 - 1 = \underline{\quad}$



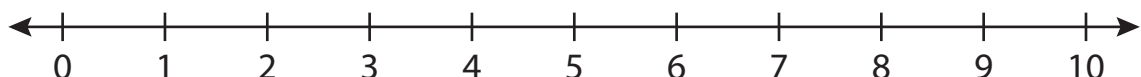
3)  $6 - 4 = \underline{\quad}$



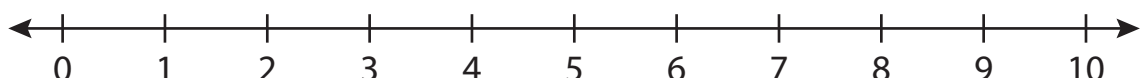
4)  $8 - 2 = \underline{\quad}$



5)  $10 - 5 = \underline{\quad}$



6)  $7 - 3 = \underline{\quad}$

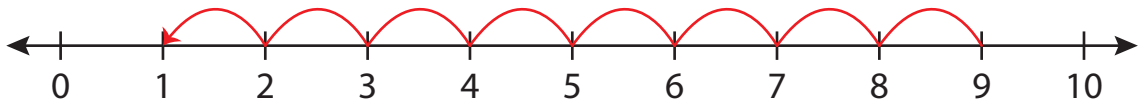
**PREVIEW**Gain complete access to the largest  
collection of worksheets in all subjects!Members, please  
log in to  
download this  
worksheet.Not a member?  
Please sign up to  
gain complete  
access.[www.mathworksheets4kids.com](http://www.mathworksheets4kids.com)

## Number Line Subtraction

0-10: S3

Indicate hops on each number line and complete the subtraction sentences.

1)  $9 - 8 = \underline{1}$



2)  $1 - 1 =$



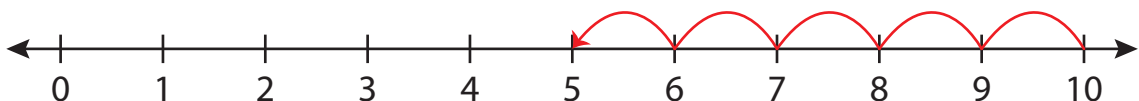
3)  $6 - 4 =$



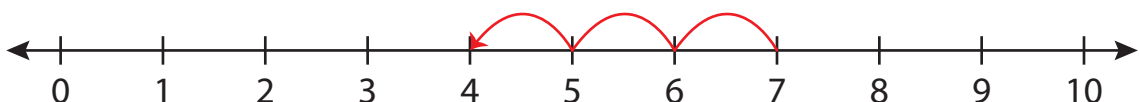
4)  $8 - 2 =$



5)  $10 - 5 =$



6)  $7 - 3 = \underline{4}$



# PREVIEW

Gain complete access to the largest  
collection of worksheets in all subjects!

Members, please  
log in to  
download this  
worksheet.

Not a member?  
Please sign up to  
gain complete  
access.

[www.mathworksheets4kids.com](http://www.mathworksheets4kids.com)