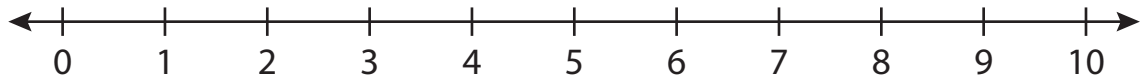


Number Line Subtraction

0-10: 54

Indicate hops on each number line and complete the subtraction sentences.

1) $10 - 2 =$ _____



2) $5 - 4 =$



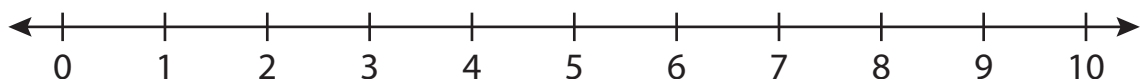
3) $8 - 8 =$



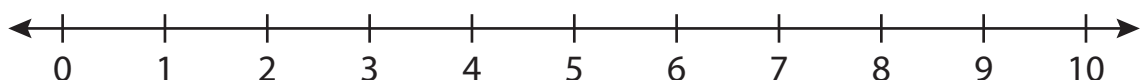
4) $6 - 3 =$



5) $9 - 7 =$



6) $2 - 1 =$ _____

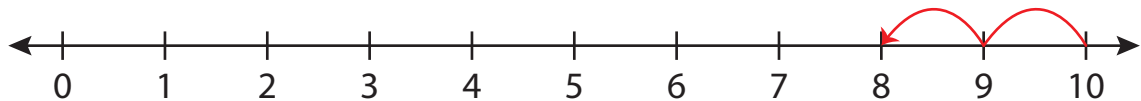
**PREVIEW**Gain complete access to the largest
collection of worksheets in all subjects!Members, please
log in to
download this
worksheet.Not a member?
Please sign up to
gain complete
access.www.mathworksheets4kids.com

Number Line Subtraction

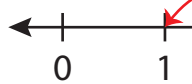
0-10: 54

Indicate hops on each number line and complete the subtraction sentences.

1) $10 - 2 = \underline{8}$



2) $5 - 4 =$



PREVIEW

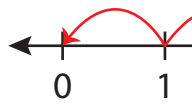
Gain complete access to the largest
collection of worksheets in all subjects!

Members, please
log in to
download this
worksheet.

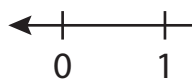
Not a member?
Please sign up to
gain complete
access.

www.mathworksheets4kids.com

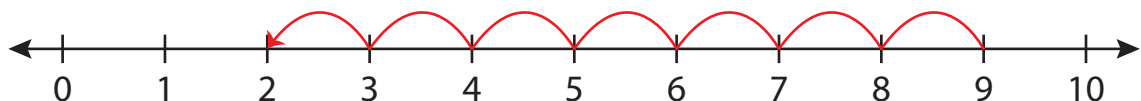
3) $8 - 8 =$



4) $6 - 3 =$



5) $9 - 7 =$



6) $2 - 1 = \underline{1}$

