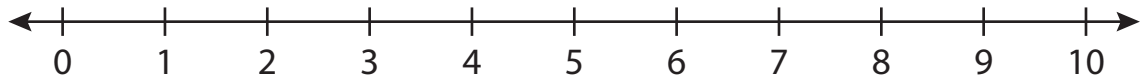


Number Line Subtraction

0-10: S5

Indicate hops on each number line and complete the subtraction sentences.

1) $8 - 7 =$ _____



2) $10 - 8 =$



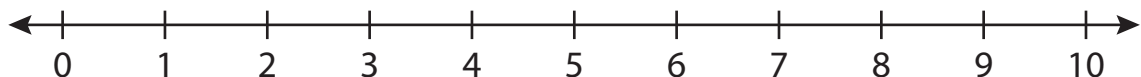
3) $9 - 6 =$



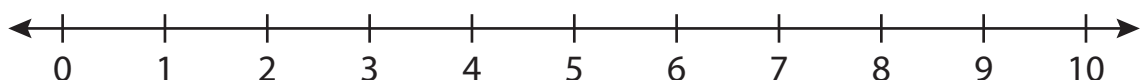
4) $7 - 5 =$



5) $6 - 2 =$



6) $4 - 4 =$ _____

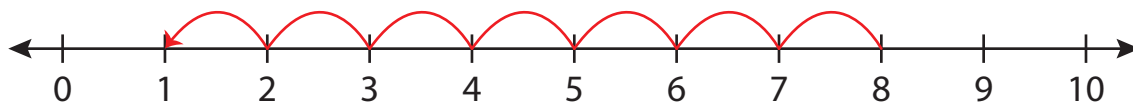
**PREVIEW**Gain complete access to the largest
collection of worksheets in all subjects!Members, please
log in to
download this
worksheet.Not a member?
Please sign up to
gain complete
access.www.mathworksheets4kids.com

Number Line Subtraction

0-10: S5

Indicate hops on each number line and complete the subtraction sentences.

1) $8 - 7 = \underline{1}$



2) $10 - 8 =$



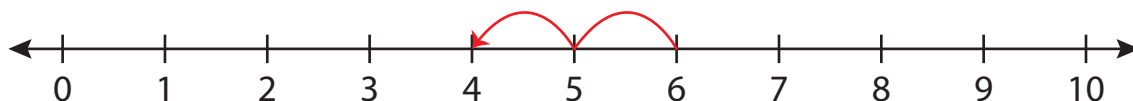
3) $9 - 6 =$



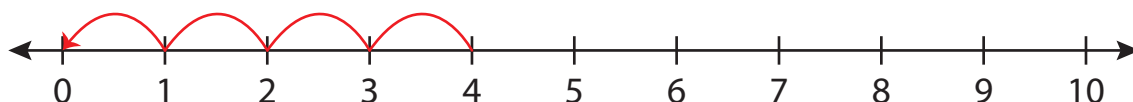
4) $7 - 5 =$



5) $6 - 2 =$



6) $4 - 4 = \underline{0}$



PREVIEW

Gain complete access to the largest collection of worksheets in all subjects!

Members, please log in to download this worksheet.

Not a member? Please sign up to gain complete access.

www.mathworksheets4kids.com