


Number Line Subtraction


0-5: S1

Indicate hops on each number line and complete the subtraction sentences.


1) $3 - 2 =$ _____



2) $4 - 1 =$ _____




3) $5 - 2 =$ _____



4) $1 - 1 =$ _____



5) $4 - 3 =$ _____



6) $5 - 5 =$ _____

