


**Number Line Subtraction**

0-5: S2

Indicate hops on each number line and complete the subtraction sentences.

1)  $4 - 1 =$  \_\_\_\_\_



2)  $5 - 4 =$




3)  $3 - 3 =$




4)  $4 - 2 =$



5)  $2 - 2 =$



6)  $3 - 1 =$  \_\_\_\_\_


**PREVIEW**Gain complete access to the largest  
collection of worksheets in all subjects!Members, please  
log in to  
download this  
worksheet.Not a member?  
Please sign up to  
gain complete  
access.[www.mathworksheets4kids.com](http://www.mathworksheets4kids.com)

**Number Line Subtraction**

0-5: S2

Indicate hops on each number line and complete the subtraction sentences.

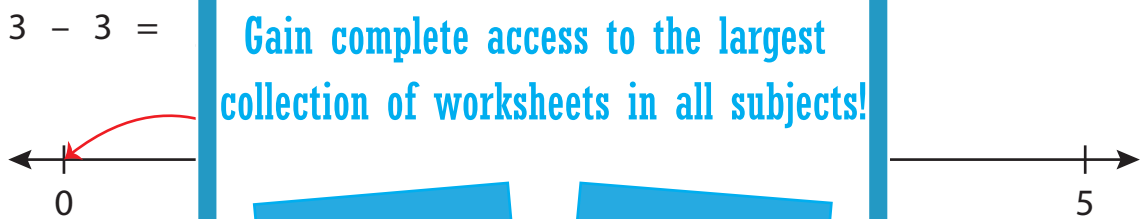
1)  $4 - 1 = \underline{3}$



2)  $5 - 4 = \underline{1}$




3)  $3 - 3 = \underline{0}$



4)  $4 - 2 = \underline{2}$



5)  $2 - 2 = \underline{0}$



6)  $3 - 1 = \underline{2}$

