


**Number Line Subtraction**

0-5: S3

Indicate hops on each number line and complete the subtraction sentences.

1)  $5 - 1 = \underline{\quad}$



2)  $3 - 2 =$




3)  $4 - 4 =$




4)  $2 - 1 =$



5)  $5 - 3 =$



6)  $1 - 1 = \underline{\quad}$



**PREVIEW**

Gain complete access to the largest collection of worksheets in all subjects!

Members, please log in to download this worksheet.

Not a member? Please sign up to gain complete access.


[www.mathworksheets4kids.com](http://www.mathworksheets4kids.com)

**Number Line Subtraction**

0-5: S3

Indicate hops on each number line and complete the subtraction sentences.

1)  $5 - 1 = \underline{4}$



2)  $3 - 2 = \underline{1}$



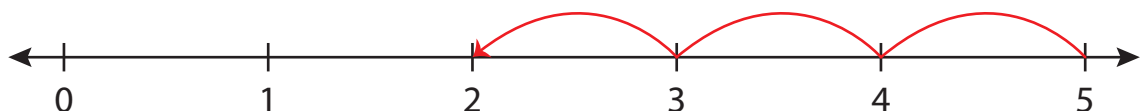
3)  $4 - 4 = \underline{0}$



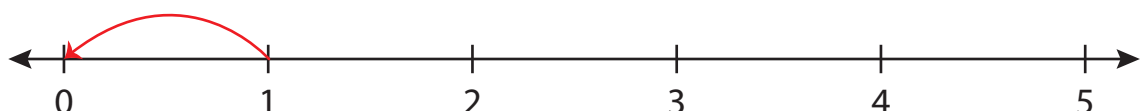
4)  $2 - 1 = \underline{1}$



5)  $5 - 3 = \underline{2}$



6)  $1 - 1 = \underline{0}$

**PREVIEW**Gain complete access to the largest  
collection of worksheets in all subjects!Members, please  
log in to  
download this  
worksheet.Not a member?  
Please sign up to  
gain complete  
access.[www.mathworksheets4kids.com](http://www.mathworksheets4kids.com)