

Number Line Subtraction

0-5: S4

Indicate hops on each number line and complete the subtraction sentences.

1) $2 - 2 =$ _____



2) $5 - 3 =$ _____




3) $3 - 1 =$ _____




4) $5 - 5 =$ _____



5) $4 - 3 =$ _____



6) $3 - 2 =$ _____



Gain complete access to the largest
collection of worksheets in all subjects!

Members, please
log in to
download this
worksheet.

Not a member?
Please sign up to
gain complete
access.


www.mathworksheets4kids.com

Number Line Subtraction

0-5: S4

Indicate hops on each number line and complete the subtraction sentences.

1) $2 - 2 = \underline{0}$



2) $5 - 3 = \underline{2}$



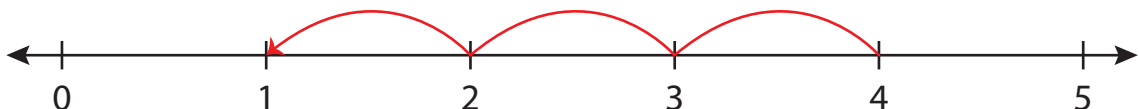
3) $3 - 1 = \underline{2}$



4) $5 - 5 = \underline{0}$



5) $4 - 3 = \underline{1}$



6) $3 - 2 = \underline{1}$

