


Number Line Subtraction

0-5: S5

Indicate hops on each number line and complete the subtraction sentences.

1) $5 - 4 =$ _____



2) $4 - 2 =$




3) $2 - 1 =$




4) $4 - 3 =$



5) $1 - 1 =$



6) $5 - 2 =$ _____

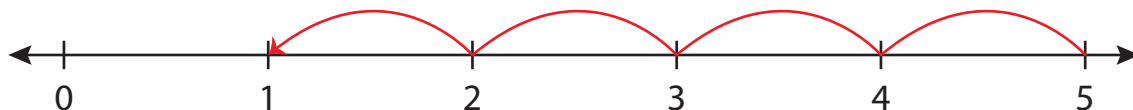
**PREVIEW**Gain complete access to the largest
collection of worksheets in all subjects!Members, please
log in to
download this
worksheet.Not a member?
Please sign up to
gain complete
access.www.mathworksheets4kids.com

Number Line Subtraction

0-5: S5

Indicate hops on each number line and complete the subtraction sentences.

1) $5 - 4 = \underline{1}$



2) $4 - 2 = \underline{2}$




3) $2 - 1 = \underline{1}$



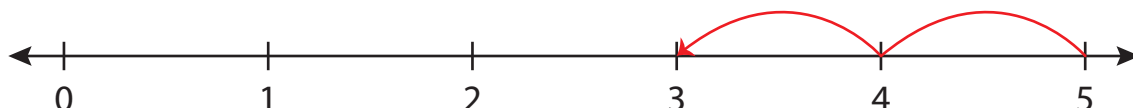
4) $4 - 3 = \underline{1}$



5) $1 - 1 = \underline{0}$



6) $5 - 2 = \underline{3}$



PREVIEW

Gain complete access to the largest collection of worksheets in all subjects!

Members, please log in to download this worksheet.

Not a member? Please sign up to gain complete access.

www.mathworksheets4kids.com