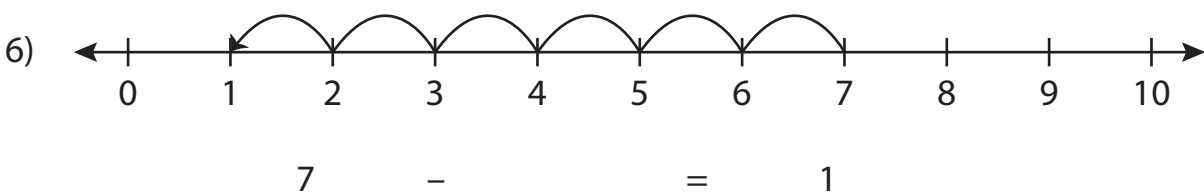
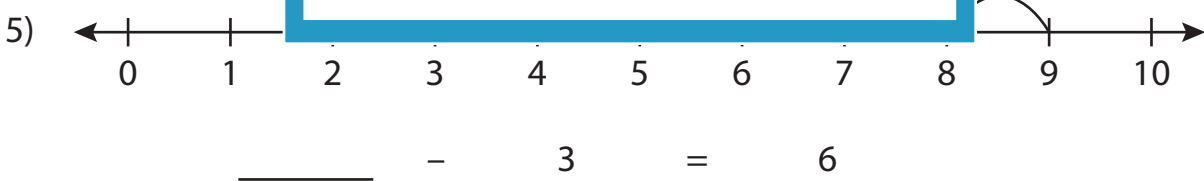
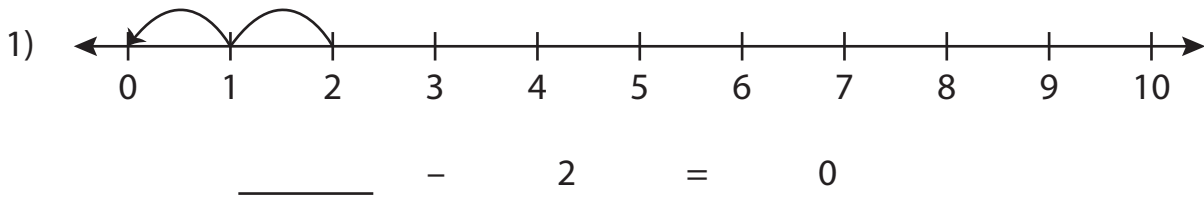


Subtraction Sentence - Missing Numbers

0-10: S2

Complete the subtraction sentence that describes each model.



PREVIEW

Gain complete access to the largest
collection of worksheets in all subjects!

Members, please
log in to
download this
worksheet.

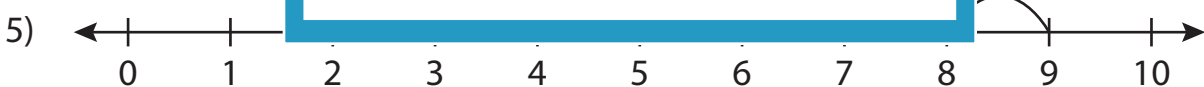
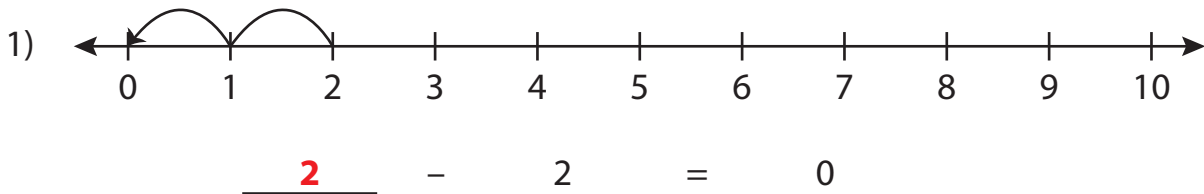
Not a member?
Please sign up to
gain complete
access.

www.mathworksheets4kids.com

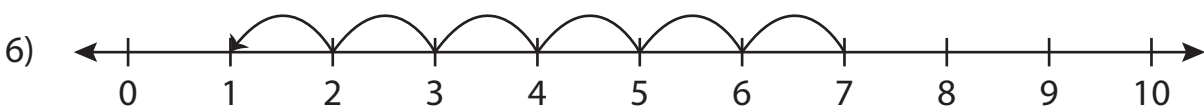
Subtraction Sentence - Missing Numbers

0-10: S2

Complete the subtraction sentence that describes each model.



9 - 3 = 6



7 - 6 = 1

PREVIEW

Gain complete access to the largest
collection of worksheets in all subjects!

Members, please
log in to
download this
worksheet.

Not a member?
Please sign up to
gain complete
access.

www.mathworksheets4kids.com