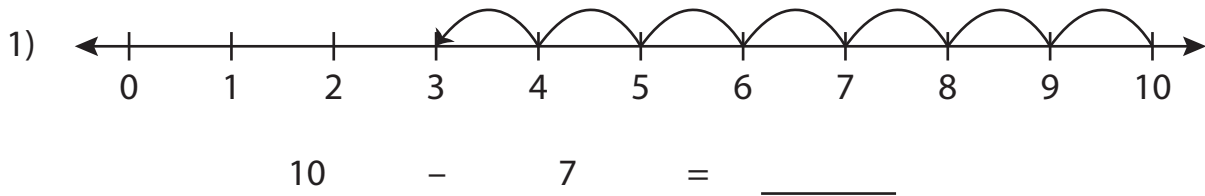


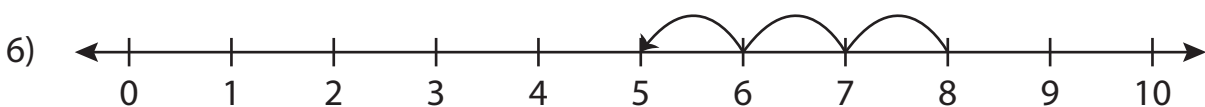
## Subtraction Sentence - Missing Numbers

0-10: S3

Complete the subtraction sentence that describes each model.



$4 - 2 = \underline{\quad}$



$\underline{\quad} - 3 = 5$

# PREVIEW

Gain complete access to the largest  
collection of worksheets in all subjects!

Members, please  
log in to  
download this  
worksheet.

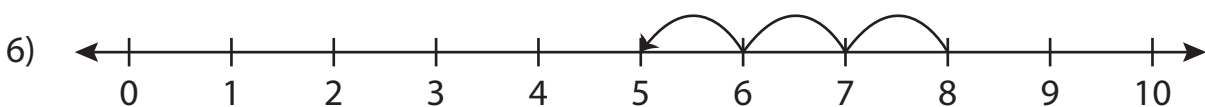
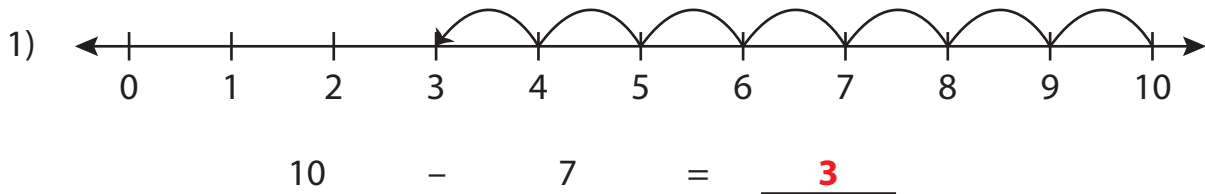
Not a member?  
Please sign up to  
gain complete  
access.

[www.mathworksheets4kids.com](http://www.mathworksheets4kids.com)

**Subtraction Sentence - Missing Numbers**

0-10: S3

Complete the subtraction sentence that describes each model.



$$\underline{8} - 3 = 5$$

**PREVIEW**

Gain complete access to the largest collection of worksheets in all subjects!

Members, please log in to download this worksheet.

Not a member? Please sign up to gain complete access.

[www.mathworksheets4kids.com](http://www.mathworksheets4kids.com)