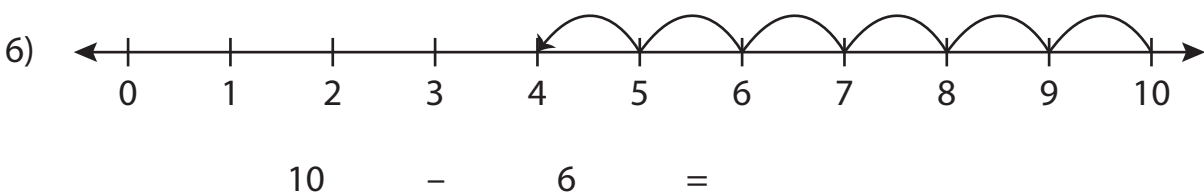
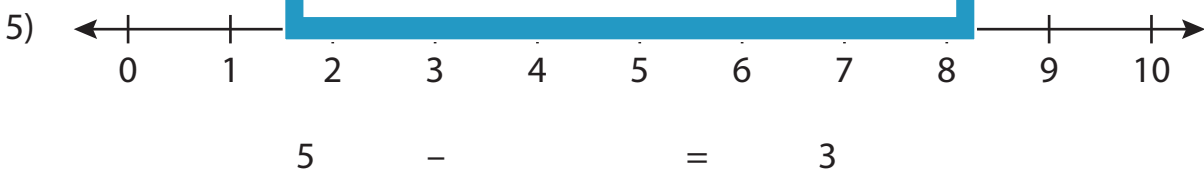
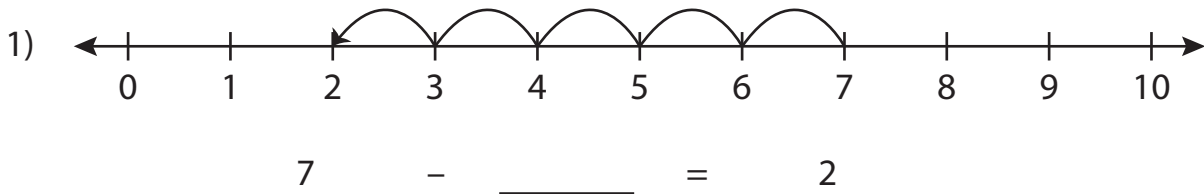


Subtraction Sentence - Missing Numbers

0-10: S4

Complete the subtraction sentence that describes each model.



PREVIEW

Gain complete access to the largest
collection of worksheets in all subjects!

Members, please
log in to
download this
worksheet.

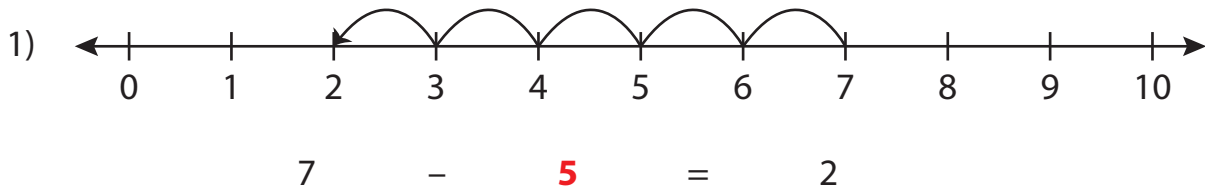
Not a member?
Please sign up to
gain complete
access.

www.mathworksheets4kids.com

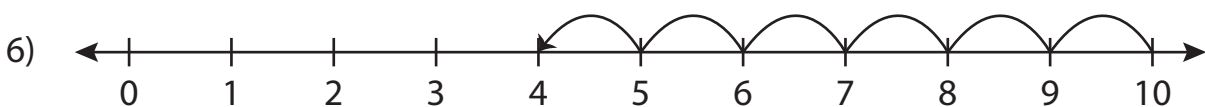
Subtraction Sentence - Missing Numbers

0-10: S4

Complete the subtraction sentence that describes each model.



$$5 - \underline{2} = 3$$



$$10 - 6 = \underline{4}$$

PREVIEW

Gain complete access to the largest collection of worksheets in all subjects!

Members, please log in to download this worksheet.

Not a member? Please sign up to gain complete access.

www.mathworksheets4kids.com