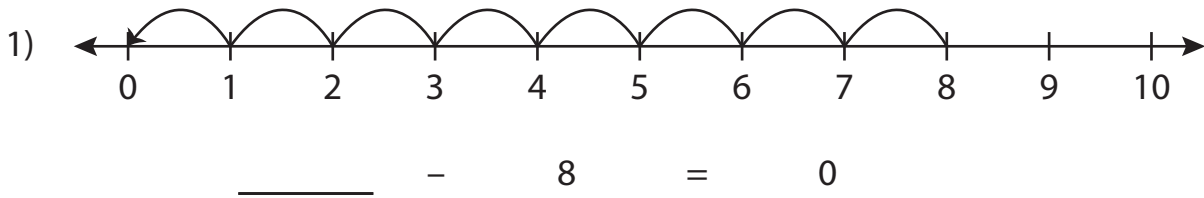


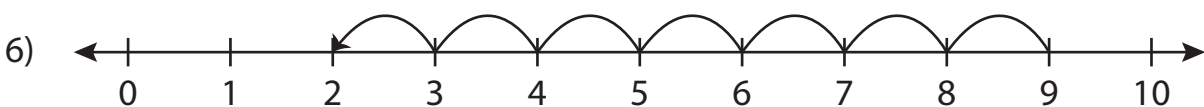
## Subtraction Sentence - Missing Numbers

0-10: S5

Complete the subtraction sentence that describes each model.



\_\_\_\_\_ - 9 = 1



9 - \_\_\_\_\_ = 2

# PREVIEW

Gain complete access to the largest  
collection of worksheets in all subjects!

Members, please  
log in to  
download this  
worksheet.

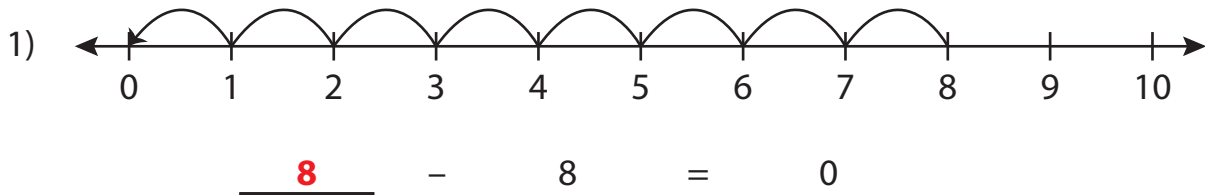
Not a member?  
Please sign up to  
gain complete  
access.

[www.mathworksheets4kids.com](http://www.mathworksheets4kids.com)

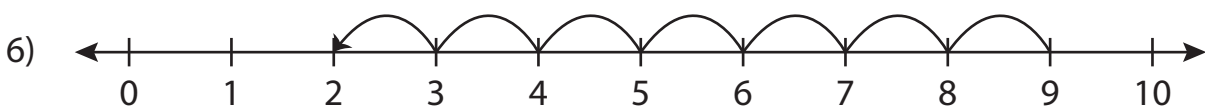
**Subtraction Sentence - Missing Numbers**

0-10: S5

Complete the subtraction sentence that describes each model.



10 - 9 = 1



9 - 7 = 2

**PREVIEW**Gain complete access to the largest  
collection of worksheets in all subjects!Members, please  
log in to  
download this  
worksheet.Not a member?  
Please sign up to  
gain complete  
access.[www.mathworksheets4kids.com](http://www.mathworksheets4kids.com)