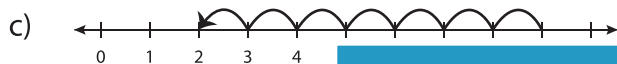
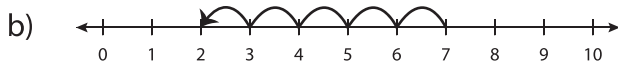
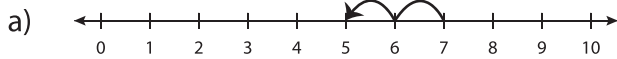


Number Line Subtraction - MCQ

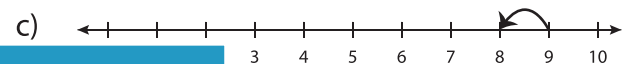
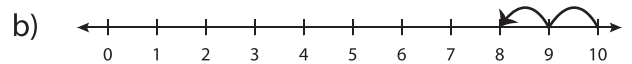
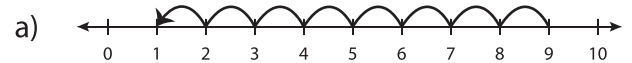
Sheet 1

Identify the correct number line for each subtraction sentence.

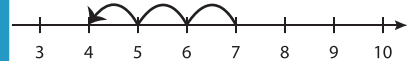
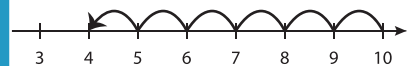
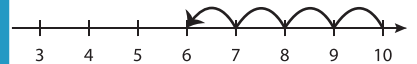
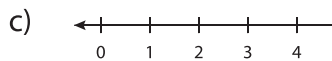
1) $7 - 5 = 2$



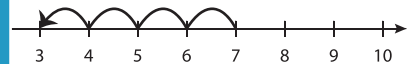
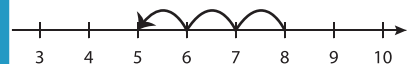
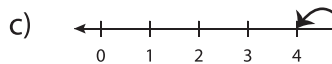
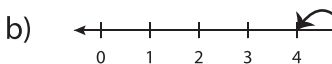
2) $9 - 8 = 1$



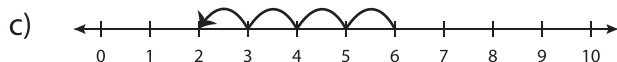
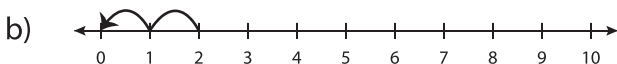
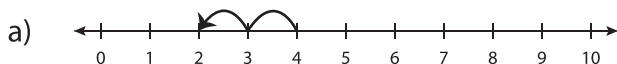
3) $8 - 1 = 7$



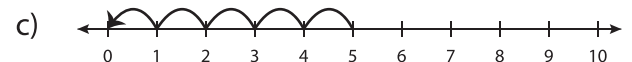
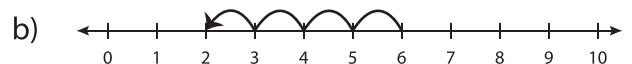
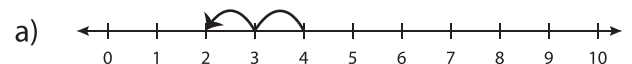
5) $5 - 4 = 1$



7) $2 - 2 = 0$



8) $4 - 2 = 2$



PREVIEW

Gain complete access to the largest
collection of worksheets in all subjects!

Members, please
log in to
download this
worksheet.

Not a member?
Please sign up to
gain complete
access.

www.mathworksheets4kids.com