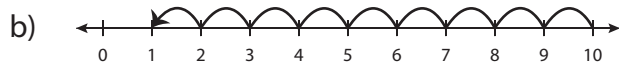
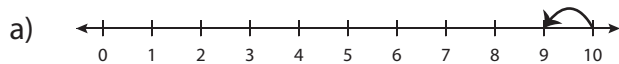


# Number Line Subtraction - MCQ

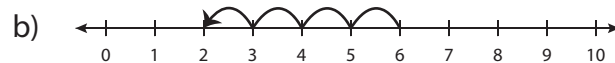
Sheet 2

Identify the correct number line for each subtraction sentence.

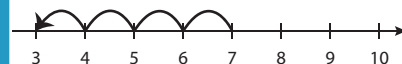
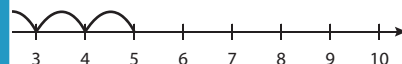
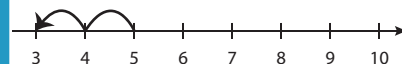
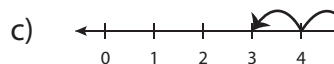
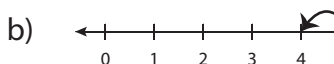
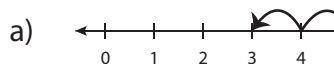
1)  $10 - 1 = 9$



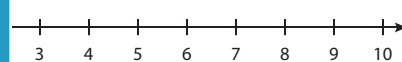
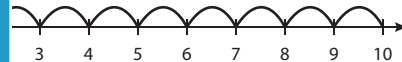
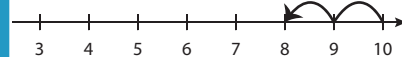
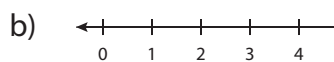
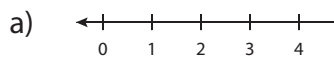
2)  $6 - 2 = 4$



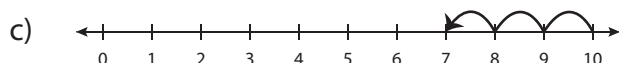
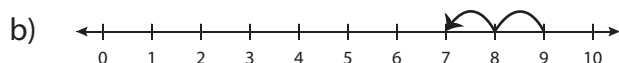
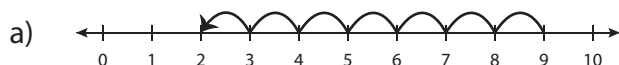
3)  $7 - 4 = 3$



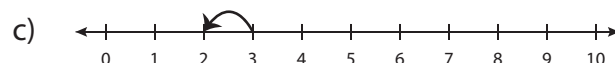
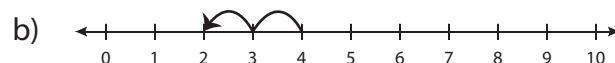
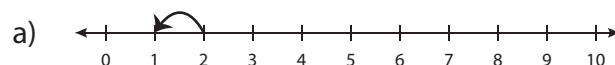
5)  $8 - 7 = 1$



7)  $9 - 2 = 7$



8)  $2 - 1 = 1$



# PREVIEW

Gain complete access to the largest collection of worksheets in all subjects!

Members, please log in to download this worksheet.

Not a member? Please sign up to gain complete access.

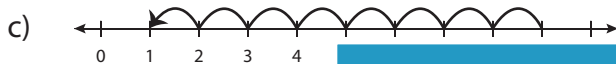
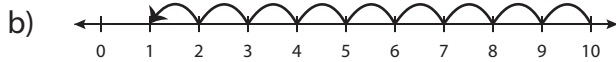
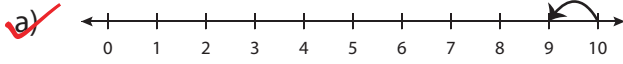
[www.mathworksheets4kids.com](http://www.mathworksheets4kids.com)

**Answer key****Number Line Subtraction - MCQ**

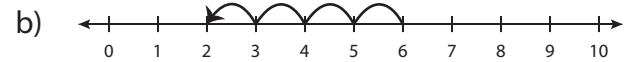
Sheet 2

Identify the correct number line for each subtraction sentence.

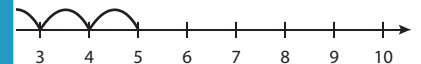
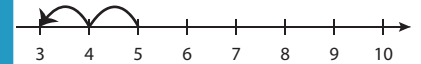
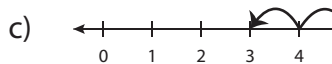
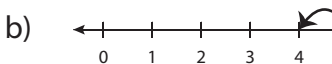
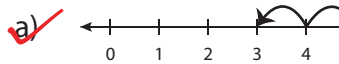
1)  $10 - 1 = 9$



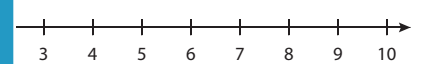
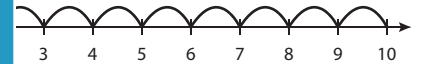
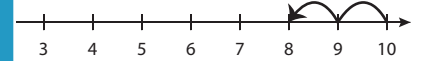
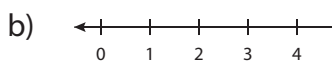
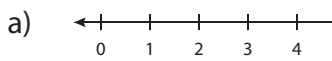
2)  $6 - 2 = 4$



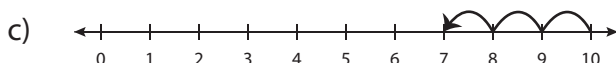
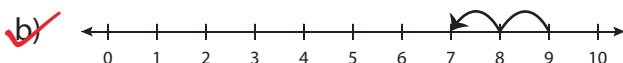
3)  $7 - 4 = 3$



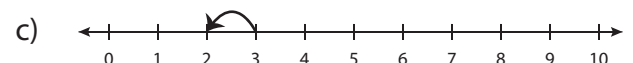
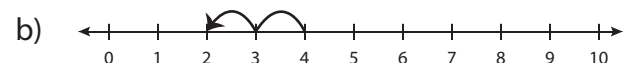
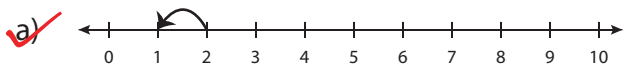
5)  $8 - 7 = 1$



7)  $9 - 2 = 7$



8)  $2 - 1 = 1$

**PREVIEW**

Gain complete access to the largest collection of worksheets in all subjects!

Members, please log in to download this worksheet.

Not a member? Please sign up to gain complete access.

[www.mathworksheets4kids.com](http://www.mathworksheets4kids.com)