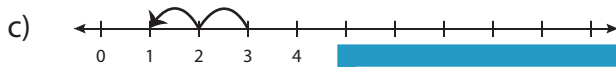
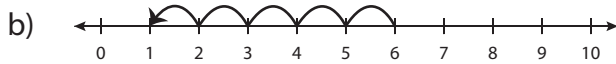
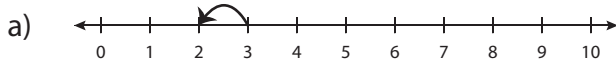


# Number Line Subtraction - MCQ

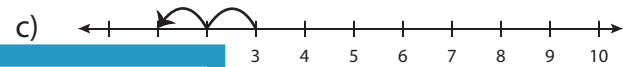
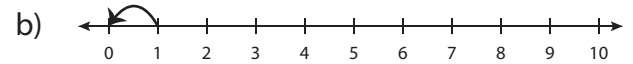
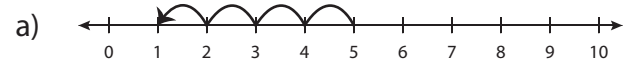
Sheet 3

Identify the correct number line for each subtraction sentence.

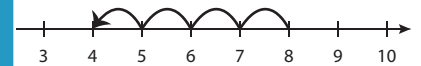
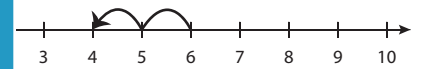
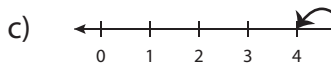
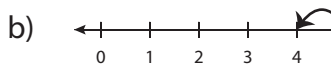
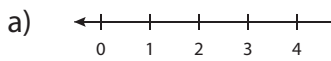
1)  $3 - 2 = 1$



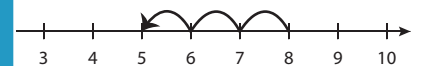
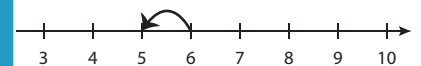
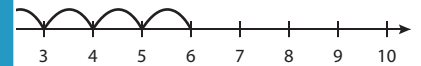
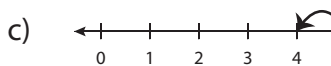
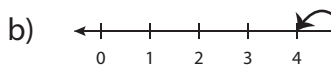
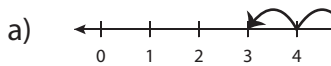
2)  $1 - 1 = 0$



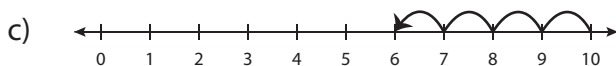
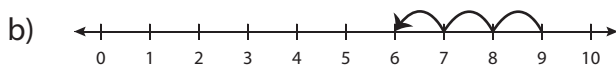
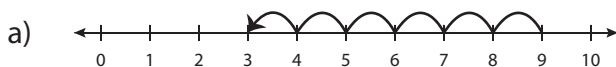
3)  $10 - 4 = 6$



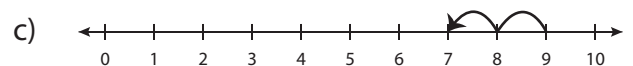
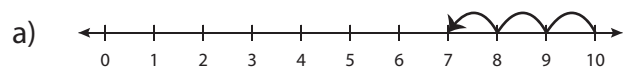
5)  $7 - 3 = 4$



7)  $9 - 6 = 3$



8)  $10 - 3 = 7$



# PREVIEW

Gain complete access to the largest collection of worksheets in all subjects!

Members, please log in to download this worksheet.

Not a member? Please sign up to gain complete access.

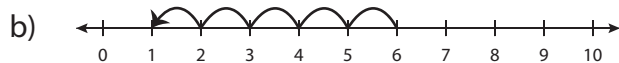
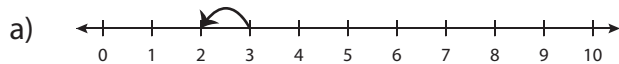
[www.mathworksheets4kids.com](http://www.mathworksheets4kids.com)

**Answer key****Number Line Subtraction - MCQ**

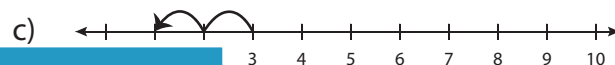
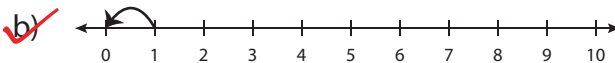
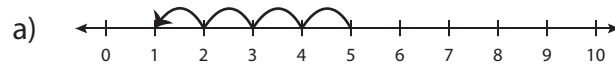
Sheet 3

Identify the correct number line for each subtraction sentence.

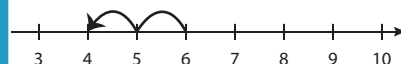
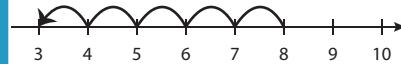
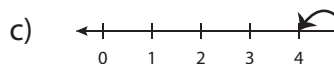
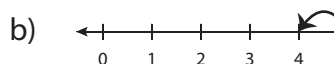
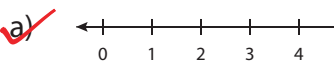
1)  $3 - 2 = 1$



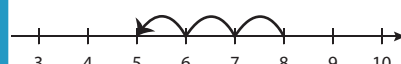
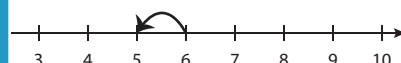
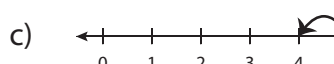
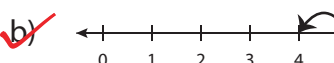
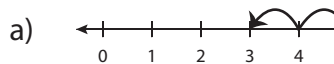
2)  $1 - 1 = 0$



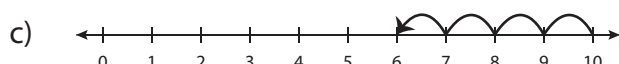
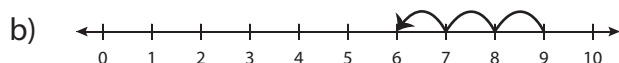
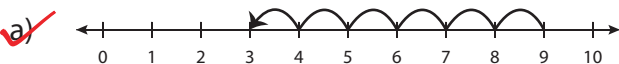
3)  $10 - 4 = 6$



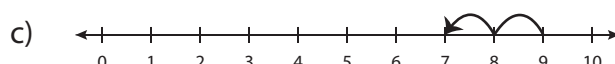
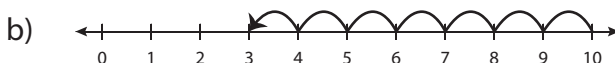
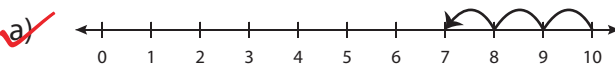
5)  $7 - 3 = 4$



7)  $9 - 6 = 3$



8)  $10 - 3 = 7$

**PREVIEW**

Gain complete access to the largest collection of worksheets in all subjects!

Members, please log in to download this worksheet.

Not a member? Please sign up to gain complete access.

[www.mathworksheets4kids.com](http://www.mathworksheets4kids.com)