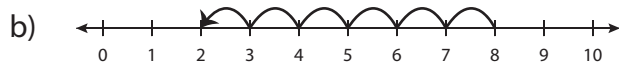
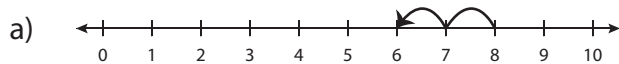


# Number Line Subtraction - MCQ

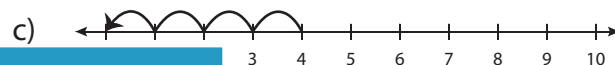
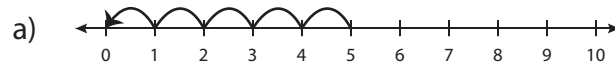
Sheet 4

Identify the correct number line for each subtraction sentence.

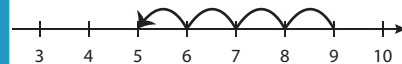
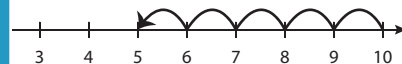
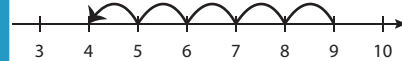
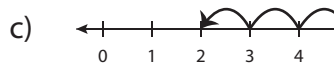
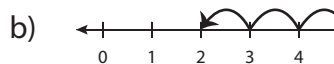
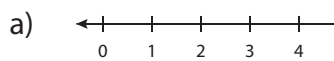
1)  $8 - 6 = 2$



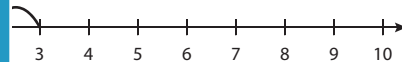
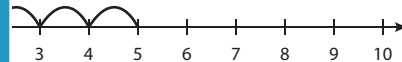
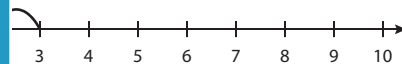
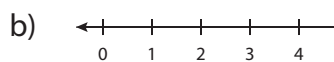
2)  $4 - 4 = 0$



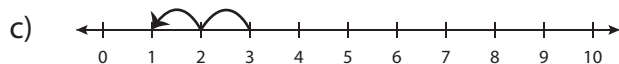
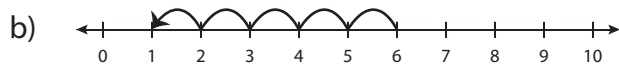
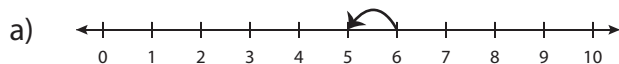
3)  $7 - 2 = 5$



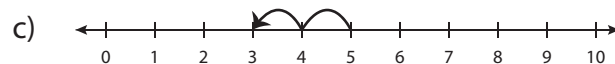
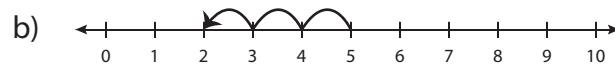
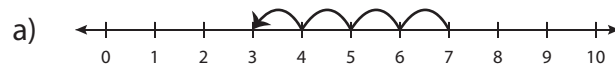
5)  $10 - 9 = 1$



7)  $6 - 1 = 5$



8)  $5 - 2 = 3$



# PREVIEW

Gain complete access to the largest collection of worksheets in all subjects!

Members, please log in to download this worksheet.

Not a member? Please sign up to gain complete access.

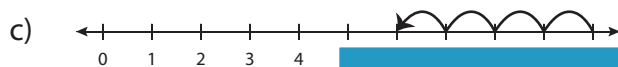
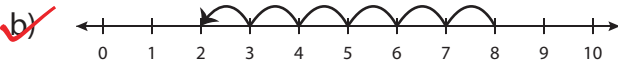
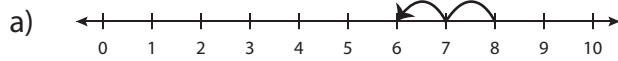
[www.mathworksheets4kids.com](http://www.mathworksheets4kids.com)

**Answer key****Number Line Subtraction - MCQ**

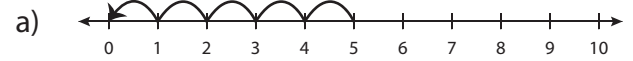
Sheet 4

Identify the correct number line for each subtraction sentence.

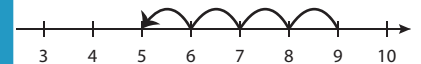
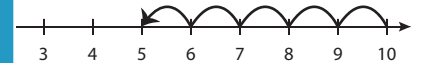
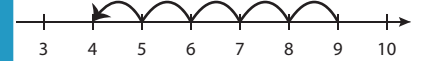
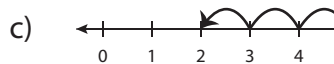
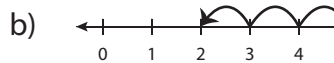
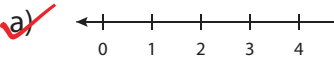
1)  $8 - 6 = 2$



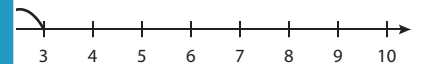
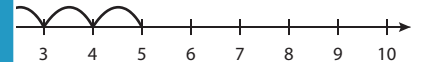
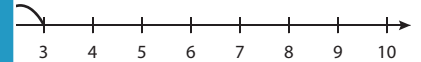
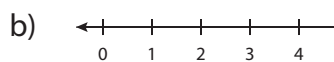
2)  $4 - 4 = 0$



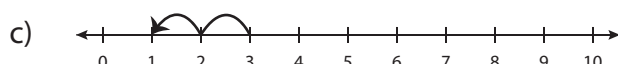
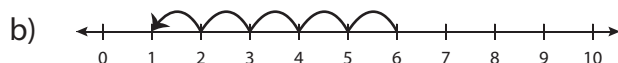
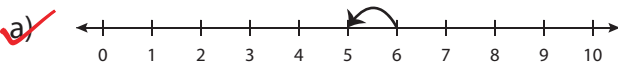
3)  $7 - 2 = 5$



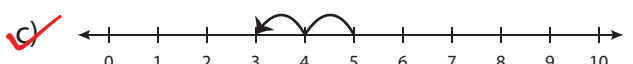
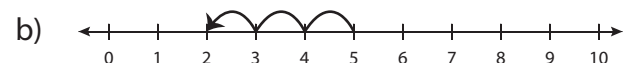
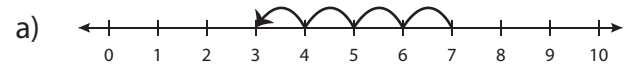
5)  $10 - 9 = 1$



7)  $6 - 1 = 5$



8)  $5 - 2 = 3$

**PREVIEW**Gain complete access to the largest  
collection of worksheets in all subjects!Members, please  
log in to  
download this  
worksheet.Not a member?  
Please sign up to  
gain complete  
access.[www.mathworksheets4kids.com](http://www.mathworksheets4kids.com)