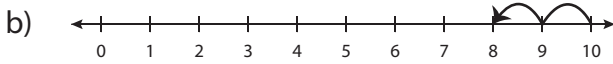
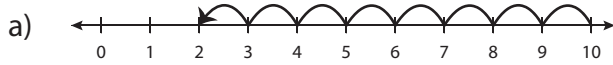


Number Line Subtraction - MCQ

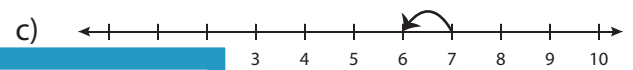
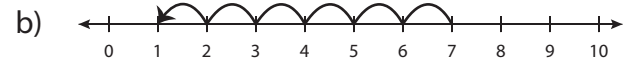
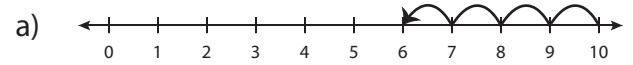
Sheet 5

Identify the correct number line for each subtraction sentence.

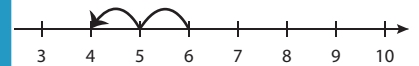
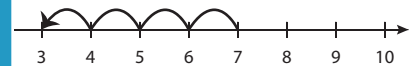
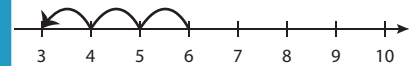
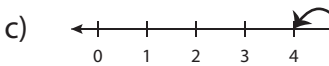
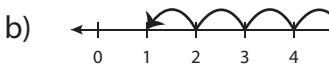
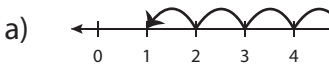
1) $10 - 2 = 8$



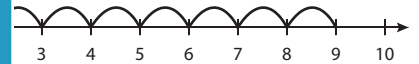
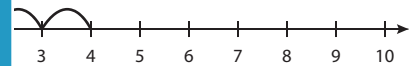
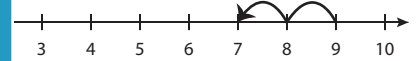
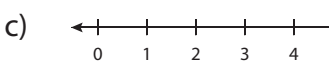
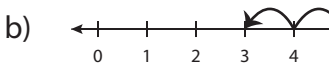
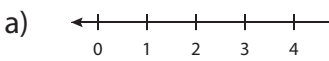
2) $7 - 6 = 1$



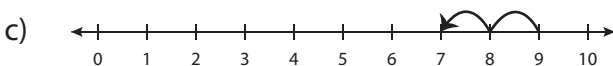
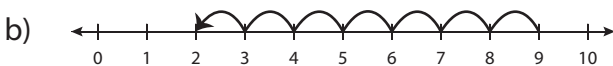
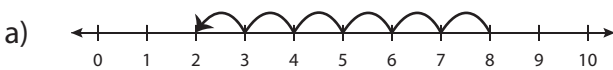
3) $5 - 1 = 4$



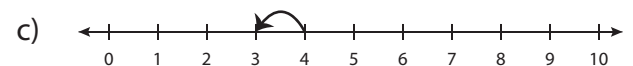
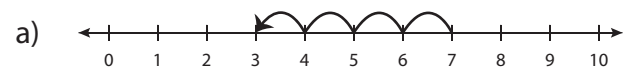
5) $8 - 5 = 3$



7) $9 - 7 = 2$



8) $4 - 3 = 1$



PREVIEW

Gain complete access to the largest collection of worksheets in all subjects!

Members, please log in to download this worksheet.

Not a member? Please sign up to gain complete access.

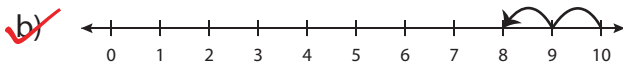
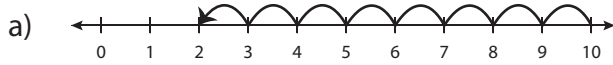
www.mathworksheets4kids.com

Answer key**Number Line Subtraction - MCQ**

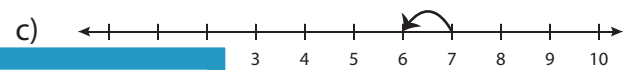
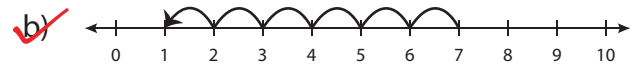
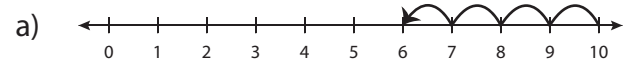
Sheet 5

Identify the correct number line for each subtraction sentence.

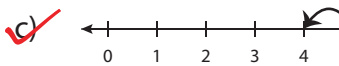
1) $10 - 2 = 8$



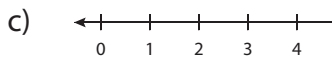
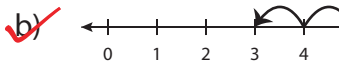
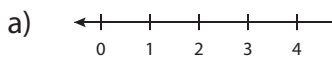
2) $7 - 6 = 1$



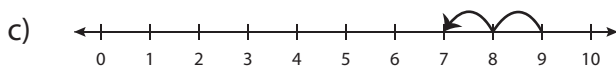
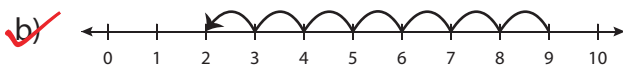
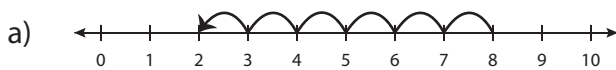
3) $5 - 1 = 4$



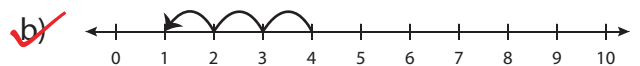
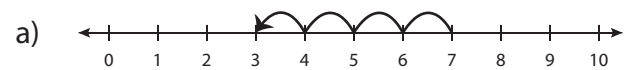
5) $8 - 5 = 3$



7) $9 - 7 = 2$



8) $4 - 3 = 1$

**PREVIEW**Gain complete access to the largest
collection of worksheets in all subjects!Members, please
log in to
download this
worksheet.Not a member?
Please sign up to
gain complete
access.www.mathworksheets4kids.com