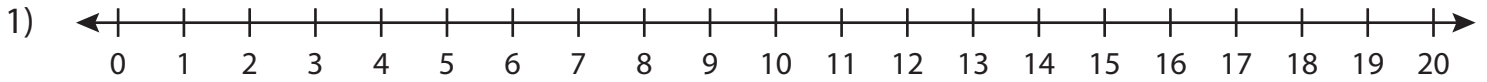


Subtraction

0-20: S4

Solve using number line.

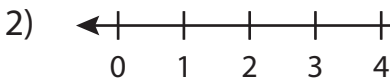


a) $9 - 5 = \underline{\quad}$ b) $18 - 15 = \underline{\quad}$ c) $20 - 12 = \underline{\quad}$

d) $12 - 7 = \underline{\quad}$ e) $13 - 3 = \underline{\quad}$

g) $2 - 1 = \underline{\quad}$ f) $11 - 2 = \underline{\quad}$

j) $19 - 11 = \underline{\quad}$ h) $15 - 6 = \underline{\quad}$



a)
$$\begin{array}{r} 18 \\ - 3 \\ \hline \end{array}$$

i)
$$\begin{array}{r} 16 \\ - 1 \\ \hline \end{array}$$

e)
$$\begin{array}{r} 4 \\ - 4 \\ \hline \end{array}$$

f)
$$\begin{array}{r} 20 \\ - 9 \\ \hline \end{array}$$

g)
$$\begin{array}{r} 12 \\ - 5 \\ \hline \end{array}$$

h)
$$\begin{array}{r} 5 \\ - 3 \\ \hline \end{array}$$

i)
$$\begin{array}{r} 9 \\ - 8 \\ \hline \end{array}$$

j)
$$\begin{array}{r} 15 \\ - 12 \\ \hline \end{array}$$

k)
$$\begin{array}{r} 10 \\ - 10 \\ \hline \end{array}$$

l)
$$\begin{array}{r} 19 \\ - 15 \\ \hline \end{array}$$

PREVIEW

Gain complete access to the largest
collection of worksheets in all subjects!

Members, please
log in to
download this
worksheet.

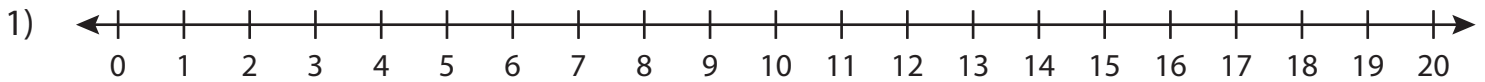
Not a member?
Please sign up to
gain complete
access.

www.mathworksheets4kids.com

Answer key**Subtraction**

0-20: S4

Solve using number line.

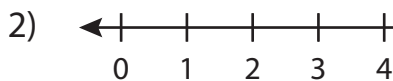


a) $9 - 5 = \underline{4}$ b) $18 - 15 = \underline{3}$ c) $20 - 12 = \underline{8}$

d) $12 - 7 = \underline{5}$ e) $13 - 3 = \underline{10}$

g) $2 - 1 = \underline{1}$ f) $11 - 2 = \underline{9}$

j) $19 - 11 = \underline{8}$ h) $16 - 6 = \underline{10}$



a)
$$\begin{array}{r} 18 \\ - 3 \\ \hline 15 \end{array}$$

i)
$$\begin{array}{r} 16 \\ - 1 \\ \hline 15 \end{array}$$

e)
$$\begin{array}{r} 4 \\ - 4 \\ \hline 0 \end{array}$$

f)
$$\begin{array}{r} 20 \\ - 9 \\ \hline 11 \end{array}$$

g)
$$\begin{array}{r} 12 \\ - 5 \\ \hline 7 \end{array}$$

h)
$$\begin{array}{r} 5 \\ - 3 \\ \hline 2 \end{array}$$

i)
$$\begin{array}{r} 9 \\ - 8 \\ \hline 1 \end{array}$$

j)
$$\begin{array}{r} 15 \\ - 12 \\ \hline 3 \end{array}$$

k)
$$\begin{array}{r} 10 \\ - 10 \\ \hline 0 \end{array}$$

l)
$$\begin{array}{r} 19 \\ - 15 \\ \hline 4 \end{array}$$

PREVIEW

Gain complete access to the largest
collection of worksheets in all subjects!

Members, please
log in to
download this
worksheet.

Not a member?
Please sign up to
gain complete
access.

www.mathworksheets4kids.com