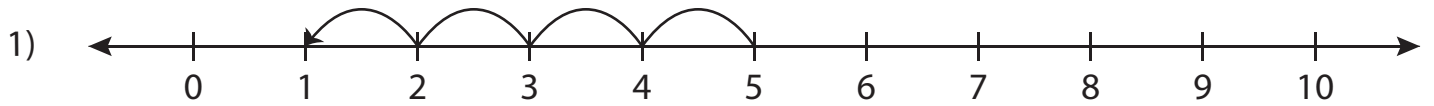


# Number Line Subtraction - MCQ

Sheet 1

Identify the correct subtraction sentence for each number line.



a)  $6 - 5 = 1$

b)  $5 - 4 = 1$

c)  $5 - 1 = 4$

d)  $6 - 1 = 5$



a)  $9 - 6 = 3$

d)  $9 - 3 = 6$



a)  $3 - 1 = 2$

d)  $5 - 3 = 2$



a)  $9 - 7 = 2$

d)  $9 - 2 = 7$

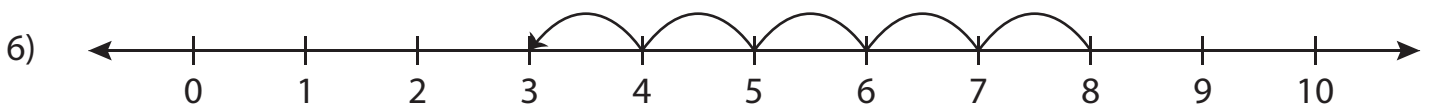


a)  $4 - 2 = 2$

b)  $2 - 2 = 0$

c)  $2 - 1 = 1$

d)  $2 - 0 = 2$



a)  $8 - 3 = 5$

b)  $7 - 4 = 3$

c)  $7 - 3 = 4$

d)  $8 - 5 = 3$

# PREVIEW

Gain complete access to the largest  
collection of worksheets in all subjects!

Members, please  
log in to  
download this  
worksheet.

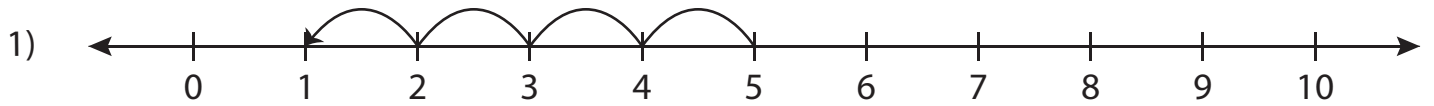
Not a member?  
Please sign up to  
gain complete  
access.

[www.mathworksheets4kids.com](http://www.mathworksheets4kids.com)

**Answer key****Number Line Subtraction - MCQ**

Sheet 1

Identify the correct subtraction sentence for each number line.



a)  $6 - 5 = 1$

b)   $5 - 4 = 1$

c)  $5 - 1 = 4$

d)  $6 - 1 = 5$



a)  $9 - 6 = 3$

d)   $9 - 3 = 6$



a)   $3 - 1 = 2$

d)  $5 - 3 = 2$



a)  $9 - 7 = 2$

d)  $9 - 2 = 7$

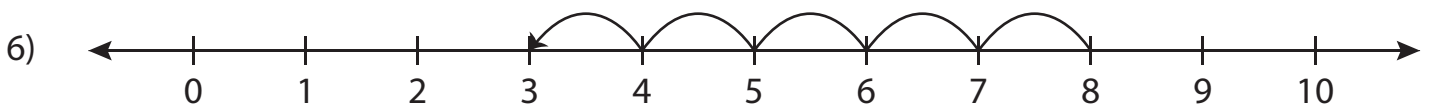


a)  $4 - 2 = 2$

b)   $2 - 2 = 0$

c)  $2 - 1 = 1$

d)  $2 - 0 = 2$



a)  $8 - 3 = 5$

b)  $7 - 4 = 3$

c)  $7 - 3 = 4$

d)   $8 - 5 = 3$

**PREVIEW**

Gain complete access to the largest collection of worksheets in all subjects!

Members, please log in to download this worksheet.

Not a member? Please sign up to gain complete access.

[www.mathworksheets4kids.com](http://www.mathworksheets4kids.com)