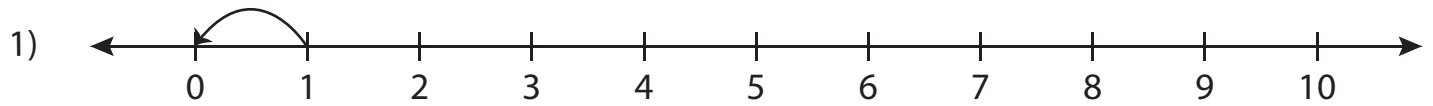


Number Line Subtraction - MCQ

Sheet 2

Identify the correct subtraction sentence for each number line.



a) $1 - 1 = 0$

b) $3 - 1 = 2$

c) $1 - 0 = 1$

d) $3 - 2 = 1$



a) $8 - 2 = 6$

d) $8 - 6 = 2$



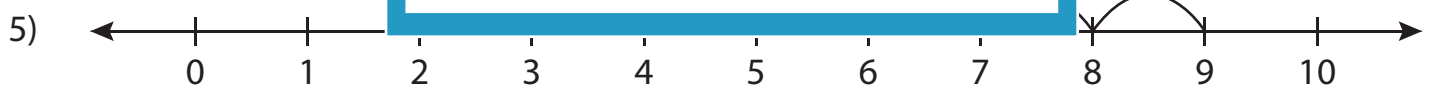
a) $7 - 3 = 4$

d) $7 - 4 = 3$



a) $5 - 4 = 1$

d) $4 - 3 = 1$

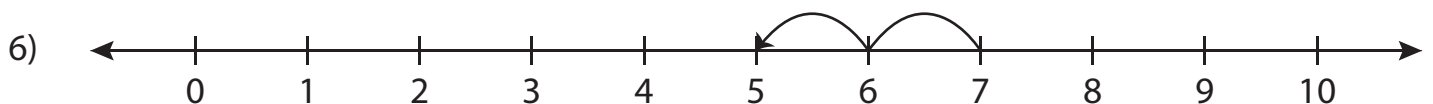


a) $9 - 5 = 4$

b) $5 - 1 = 4$

c) $9 - 4 = 5$

d) $5 - 4 = 1$



a) $9 - 2 = 7$

b) $7 - 5 = 2$

c) $7 - 2 = 5$

d) $9 - 7 = 2$

PREVIEW

Gain complete access to the largest
collection of worksheets in all subjects!

Members, please
log in to
download this
worksheet.

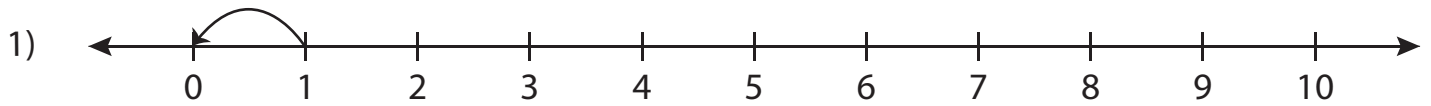
Not a member?
Please sign up to
gain complete
access.

www.mathworksheets4kids.com

Answer key**Number Line Subtraction - MCQ**

Sheet 2

Identify the correct subtraction sentence for each number line.



a) $1 - 1 = 0$

b) $3 - 1 = 2$

c) $1 - 0 = 1$

d) $3 - 2 = 1$



a) $8 - 2 = 6$

d) $8 - 6 = 2$



a) $7 - 3 = 4$

d) $7 - 4 = 3$



a) $5 - 4 = 1$

d) $4 - 3 = 1$

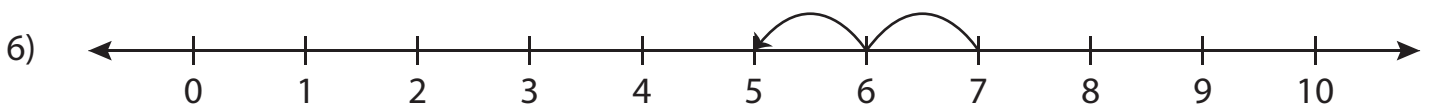


a) $9 - 5 = 4$

b) $5 - 1 = 4$

c) $9 - 4 = 5$

d) $5 - 4 = 1$



a) $9 - 2 = 7$

b) $7 - 5 = 2$

c) $7 - 2 = 5$

d) $9 - 7 = 2$

PREVIEW

Gain complete access to the largest collection of worksheets in all subjects!

Members, please log in to download this worksheet.

Not a member? Please sign up to gain complete access.

www.mathworksheets4kids.com