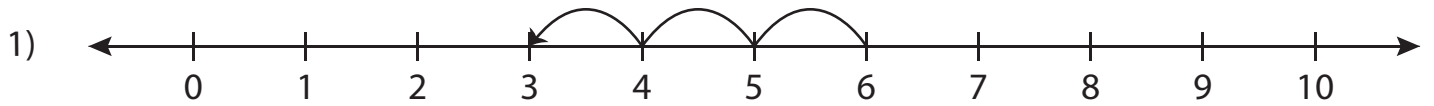


# Number Line Subtraction - MCQ

Sheet 3

Identify the correct subtraction sentence for each number line.



a)  $7 - 4 = 3$

b)  $9 - 6 = 3$

c)  $6 - 3 = 3$

d)  $7 - 3 = 4$



a)  $8 - 6 = 2$

d)  $10 - 8 = 2$



a)  $4 - 4 = 0$

d)  $5 - 5 = 0$



a)  $8 - 1 = 7$

d)  $7 - 6 = 1$

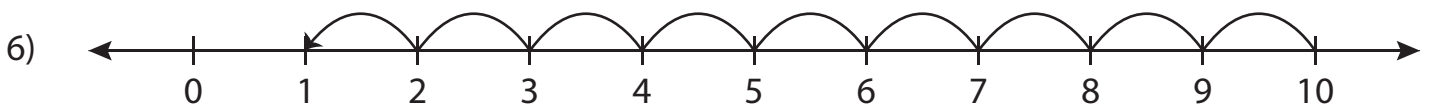


a)  $6 - 4 = 2$

b)  $4 - 3 = 1$

c)  $4 - 2 = 2$

d)  $6 - 2 = 4$



a)  $10 - 1 = 9$

b)  $9 - 1 = 8$

c)  $9 - 8 = 1$

d)  $10 - 9 = 1$

**PREVIEW**

Gain complete access to the largest collection of worksheets in all subjects!

Members, please log in to download this worksheet.

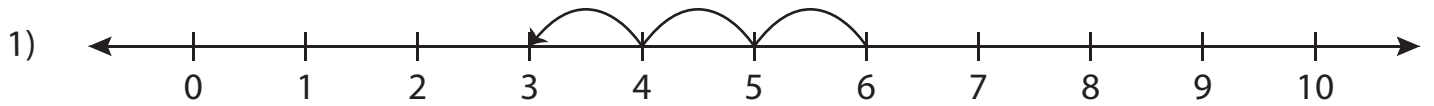
Not a member? Please sign up to gain complete access.

[www.mathworksheets4kids.com](http://www.mathworksheets4kids.com)

**Answer key****Number Line Subtraction - MCQ**

Sheet 3

Identify the correct subtraction sentence for each number line.



a)  $7 - 4 = 3$

b)  $9 - 6 = 3$

c)  $6 - 3 = 3$

d)  $7 - 3 = 4$



a)  $8 - 6 = 2$

d)  $10 - 8 = 2$



a)  $4 - 4 = 0$

d)  $5 - 5 = 0$



a)  $8 - 1 = 7$

d)  $7 - 6 = 1$

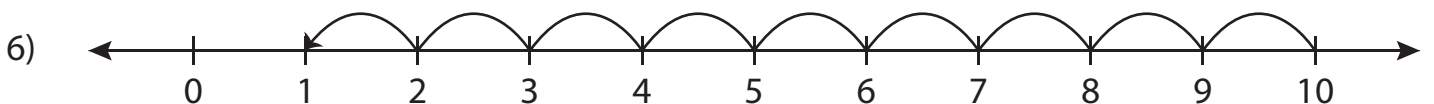


a)  $6 - 4 = 2$

b)  $4 - 3 = 1$

c)  $4 - 2 = 2$

d)  $6 - 2 = 4$



a)  $10 - 1 = 9$

b)  $9 - 1 = 8$

c)  $9 - 8 = 1$

d)  $10 - 9 = 1$

**PREVIEW**

Gain complete access to the largest collection of worksheets in all subjects!

Members, please log in to download this worksheet.

Not a member? Please sign up to gain complete access.

[www.mathworksheets4kids.com](http://www.mathworksheets4kids.com)