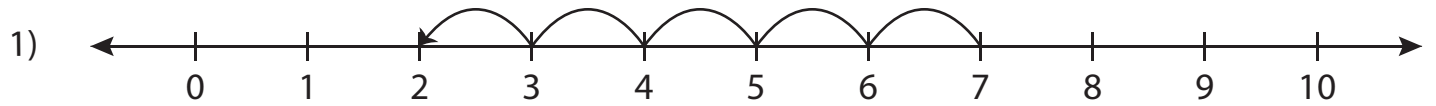


Number Line Subtraction - MCQ

Sheet 4

Identify the correct subtraction sentence for each number line.



a) $7 - 5 = 2$

b) $7 - 2 = 5$

c) $9 - 2 = 7$

d) $9 - 7 = 2$



a) $6 - 4 = 2$

d) $6 - 2 = 4$



a) $8 - 5 = 3$

d) $5 - 2 = 3$



a) $6 - 0 = 6$

d) $6 - 6 = 0$

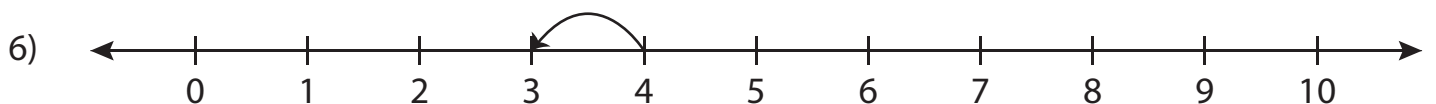


a) $9 - 1 = 8$

b) $10 - 1 = 9$

c) $9 - 8 = 1$

d) $10 - 9 = 1$



a) $4 - 1 = 3$

b) $5 - 1 = 4$

c) $4 - 3 = 1$

d) $5 - 4 = 1$

PREVIEW

Gain complete access to the largest
collection of worksheets in all subjects!

Members, please
log in to
download this
worksheet.

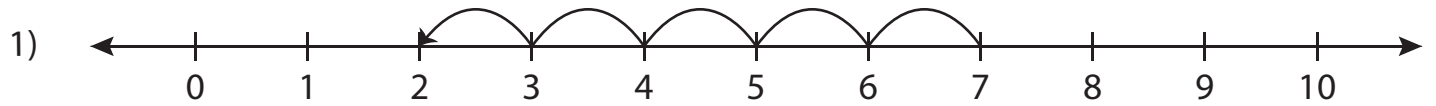
Not a member?
Please sign up to
gain complete
access.

www.mathworksheets4kids.com

Answer key**Number Line Subtraction - MCQ**

Sheet 4

Identify the correct subtraction sentence for each number line.



a) $7 - 5 = 2$

b) $7 - 2 = 5$

c) $9 - 2 = 7$

d) $9 - 7 = 2$



a) $6 - 4 = 2$

d) $6 - 2 = 4$



a) $8 - 5 = 3$

d) $5 - 2 = 3$



a) $6 - 0 = 6$

d) $6 - 6 = 0$

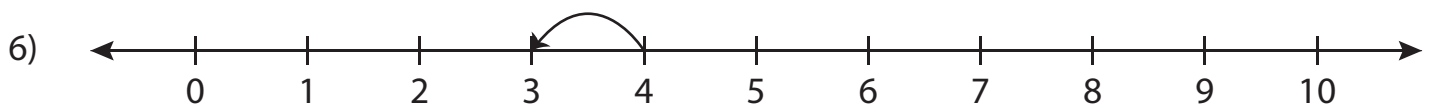


a) $9 - 1 = 8$

b) $10 - 1 = 9$

c) $9 - 8 = 1$

d) $10 - 9 = 1$



a) $4 - 1 = 3$

b) $5 - 1 = 4$

c) $4 - 3 = 1$

d) $5 - 4 = 1$

PREVIEWGain complete access to the largest
collection of worksheets in all subjects!Members, please
log in to
download this
worksheet.Not a member?
Please sign up to
gain complete
access.www.mathworksheets4kids.com