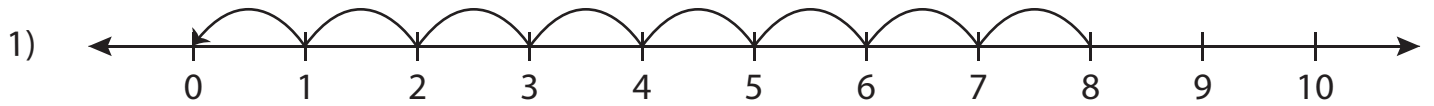


Number Line Subtraction - MCQ

Sheet 5

Identify the correct subtraction sentence for each number line.



a) $8 - 0 = 8$

b) $10 - 8 = 2$

c) $10 - 2 = 8$

d) $8 - 8 = 0$



a) $2 - 1 = 1$

d) $3 - 1 = 2$



a) $7 - 2 = 5$

d) $9 - 7 = 2$



a) $7 - 3 = 4$

d) $10 - 3 = 7$

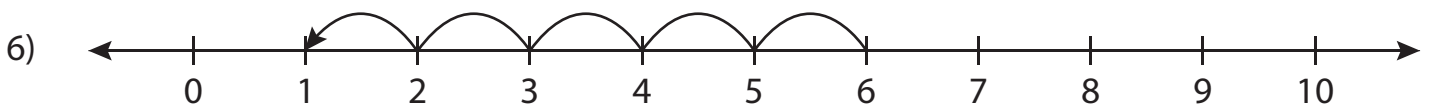


a) $10 - 6 = 4$

b) $10 - 4 = 6$

c) $6 - 4 = 2$

d) $6 - 2 = 4$



a) $6 - 1 = 5$

b) $7 - 1 = 6$

c) $6 - 5 = 1$

d) $7 - 6 = 1$

PREVIEW

Gain complete access to the largest
collection of worksheets in all subjects!

Members, please
log in to
download this
worksheet.

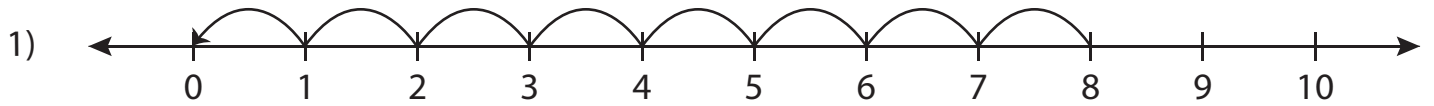
Not a member?
Please sign up to
gain complete
access.

www.mathworksheets4kids.com

Answer key**Number Line Subtraction - MCQ**

Sheet 5

Identify the correct subtraction sentence for each number line.



a) $8 - 0 = 8$

b) $10 - 8 = 2$

c) $10 - 2 = 8$

d) $8 - 8 = 0$



a) $2 - 1 = 1$

d) $3 - 1 = 2$



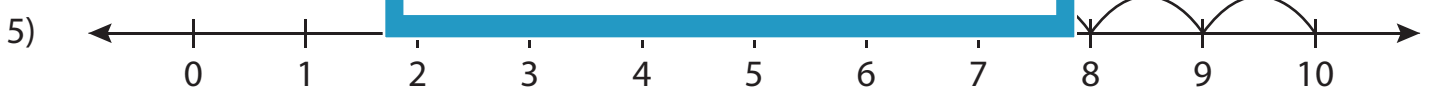
a) $7 - 2 = 5$

d) $9 - 7 = 2$



a) $7 - 3 = 4$

d) $10 - 3 = 7$

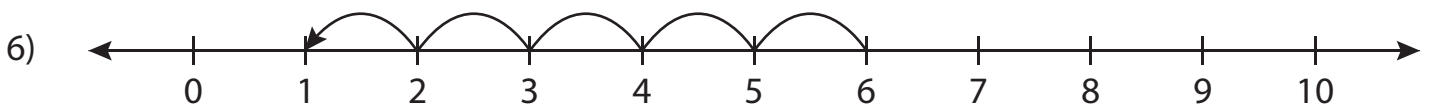


a) $10 - 6 = 4$

b) $10 - 4 = 6$

c) $6 - 4 = 2$

d) $6 - 2 = 4$



a) $6 - 1 = 5$

b) $7 - 1 = 6$

c) $6 - 5 = 1$

d) $7 - 6 = 1$

PREVIEW

Gain complete access to the largest
collection of worksheets in all subjects!

Members, please
log in to
download this
worksheet.

Not a member?
Please sign up to
gain complete
access.

www.mathworksheets4kids.com