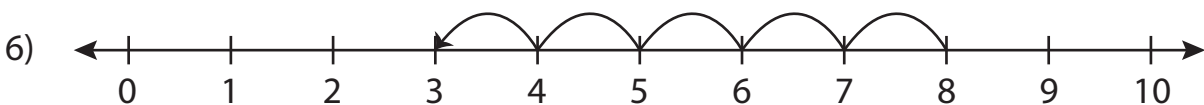
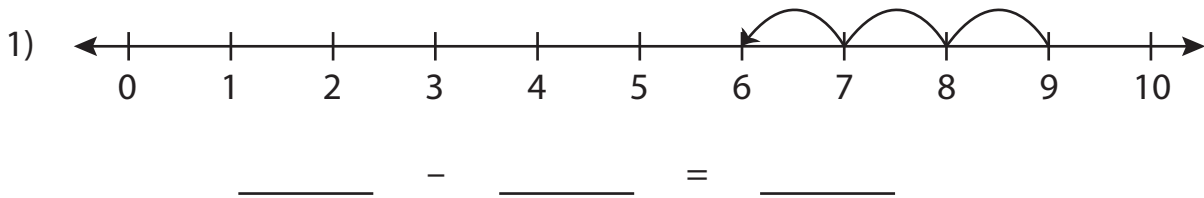


Subtraction Sentence

0-10: S1

Write the subtraction sentence that describes each model.



PREVIEW

Gain complete access to the largest
collection of worksheets in all subjects!

Members, please
log in to
download this
worksheet.

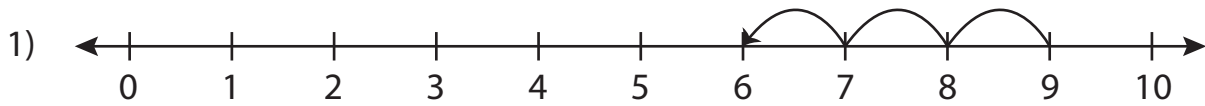
Not a member?
Please sign up to
gain complete
access.

www.mathworksheets4kids.com

Subtraction Sentence

0-10: S1

Write the subtraction sentence that describes each model.



$$\underline{9} - \underline{3} = \underline{6}$$



$$\underline{5} - \underline{1} = \underline{4}$$



$$\underline{8} - \underline{5} = \underline{3}$$

PREVIEWGain complete access to the largest
collection of worksheets in all subjects!Members, please
log in to
download this
worksheet.Not a member?
Please sign up to
gain complete
access.www.mathworksheets4kids.com