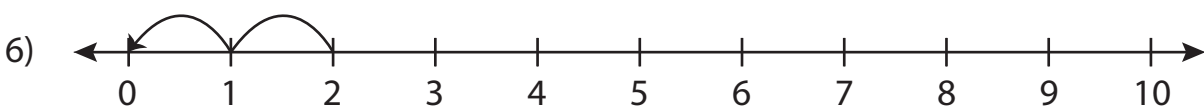
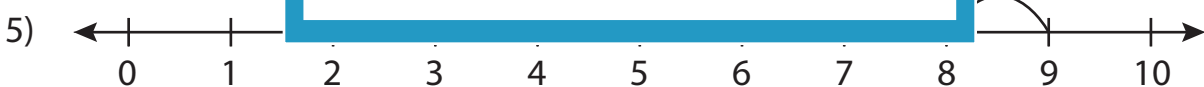
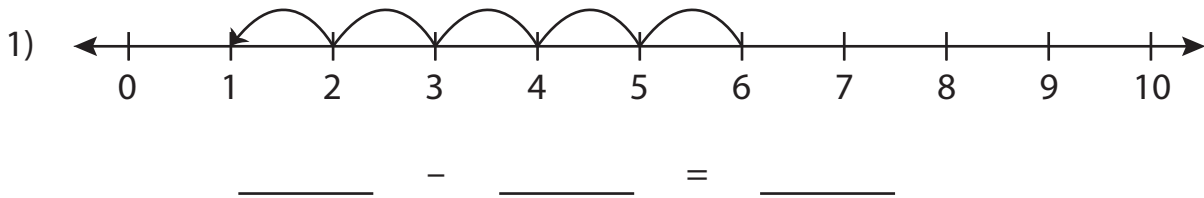


Subtraction Sentence

0-10: S2

Write the subtraction sentence that describes each model.



PREVIEW

Gain complete access to the largest
collection of worksheets in all subjects!

Members, please
log in to
download this
worksheet.

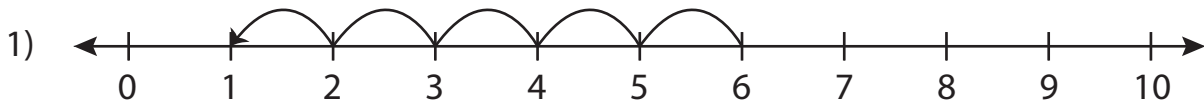
Not a member?
Please sign up to
gain complete
access.

www.mathworksheets4kids.com

Subtraction Sentence

0-10: S2

Write the subtraction sentence that describes each model.



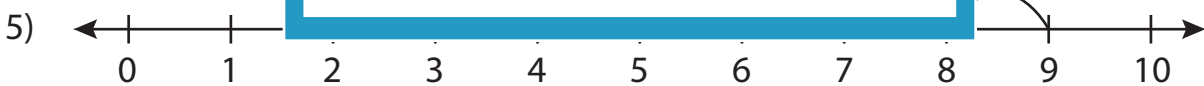
$$\underline{6} - \underline{5} = \underline{1}$$

**PREVIEW**

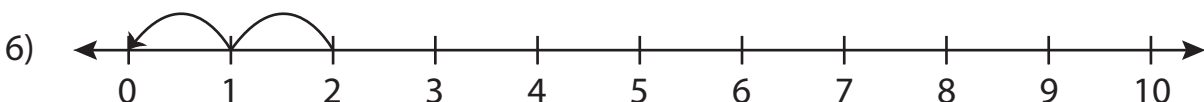
Gain complete access to the largest collection of worksheets in all subjects!

Members, please log in to download this worksheet.

Not a member? Please sign up to gain complete access.

www.mathworksheets4kids.com

$$\underline{9} - \underline{6} = \underline{3}$$



$$\underline{2} - \underline{2} = \underline{0}$$