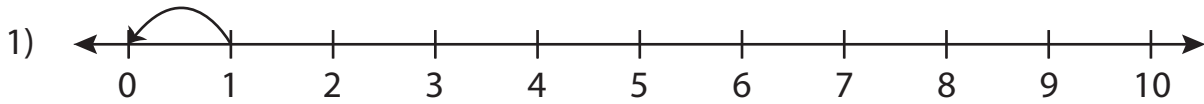


Subtraction Sentence

0-10: S3

Write the subtraction sentence that describes each model.



$$\underline{\quad} - \underline{\quad} = \underline{\quad}$$

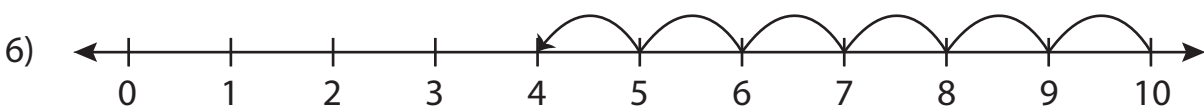








$$\underline{\quad} - \underline{\quad} = \underline{\quad}$$



$$\underline{\quad} - \underline{\quad} = \underline{\quad}$$

PREVIEW

Gain complete access to the largest
collection of worksheets in all subjects!

Members, please
log in to
download this
worksheet.

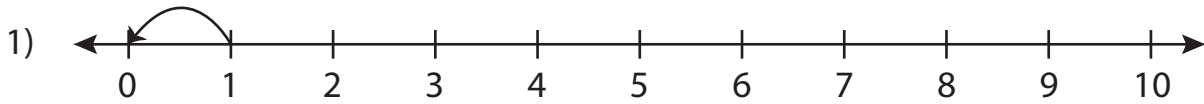
Not a member?
Please sign up to
gain complete
access.

www.mathworksheets4kids.com

Subtraction Sentence

0-10: S3

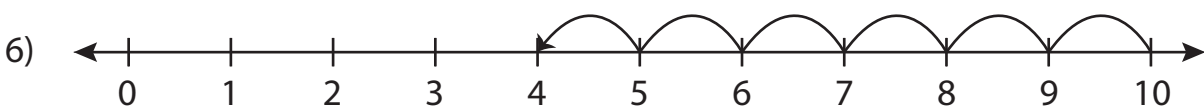
Write the subtraction sentence that describes each model.



$$\underline{1} - \underline{1} = \underline{0}$$



$$\underline{6} - \underline{3} = \underline{3}$$



$$\underline{10} - \underline{6} = \underline{4}$$

PREVIEW

Gain complete access to the largest collection of worksheets in all subjects!

Members, please log in to download this worksheet.

Not a member? Please sign up to gain complete access.

www.mathworksheets4kids.com