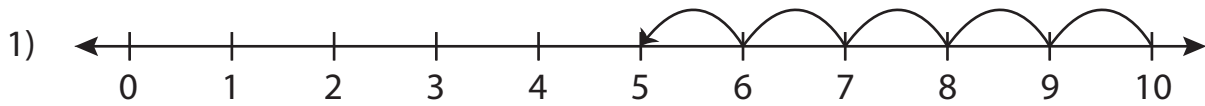


## Subtraction Sentence

0-10: S4

Write the subtraction sentence that describes each model.



$$\underline{\quad} - \underline{\quad} = \underline{\quad}$$



\_\_\_\_\_



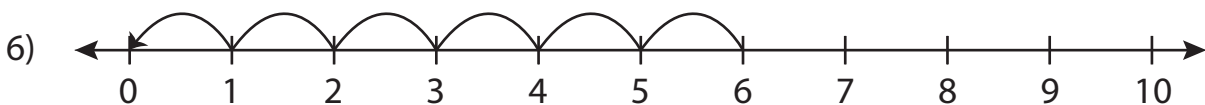
\_\_\_\_\_



\_\_\_\_\_



$$\underline{\quad} - \underline{\quad} = \underline{\quad}$$



$$\underline{\quad} - \underline{\quad} = \underline{\quad}$$

# PREVIEW

Gain complete access to the largest collection of worksheets in all subjects!

Members, please log in to download this worksheet.

Not a member? Please sign up to gain complete access.

[www.mathworksheets4kids.com](http://www.mathworksheets4kids.com)

**Subtraction Sentence**

0-10: S4

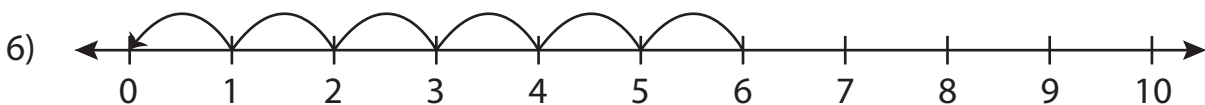
Write the subtraction sentence that describes each model.



$$\underline{10} - \underline{5} = \underline{5}$$



$$\underline{9} - \underline{7} = \underline{2}$$



$$\underline{6} - \underline{6} = \underline{0}$$

**PREVIEW**

Gain complete access to the largest collection of worksheets in all subjects!

Members, please log in to download this worksheet.

Not a member? Please sign up to gain complete access.

[www.mathworksheets4kids.com](http://www.mathworksheets4kids.com)