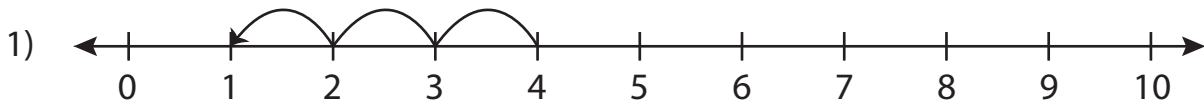


# Subtraction Sentence

0-10: S5

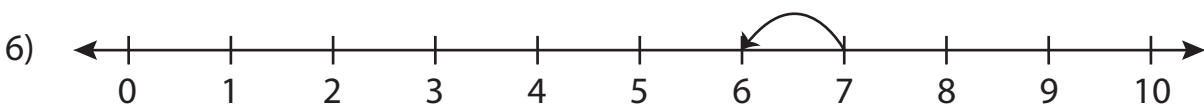
Write the subtraction sentence that describes each model.



$$\underline{\quad} - \underline{\quad} = \underline{\quad}$$



$$\underline{\quad} - \underline{\quad} = \underline{\quad}$$



$$\underline{\quad} - \underline{\quad} = \underline{\quad}$$

## PREVIEW

Gain complete access to the largest  
collection of worksheets in all subjects!

Members, please  
log in to  
download this  
worksheet.

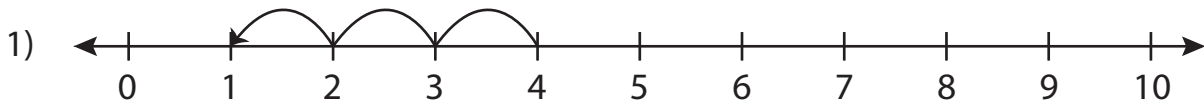
Not a member?  
Please sign up to  
gain complete  
access.

www.mathworksheets4kids.com

**Subtraction Sentence**

0-10: S5

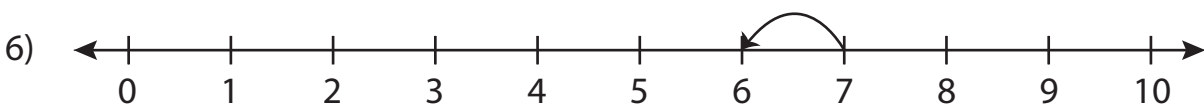
Write the subtraction sentence that describes each model.



$$\underline{4} - \underline{3} = \underline{1}$$



$$\underline{5} - \underline{5} = \underline{0}$$



$$\underline{7} - \underline{1} = \underline{6}$$

**PREVIEW**

Gain complete access to the largest collection of worksheets in all subjects!

Members, please log in to download this worksheet.

Not a member? Please sign up to gain complete access.

[www.mathworksheets4kids.com](http://www.mathworksheets4kids.com)