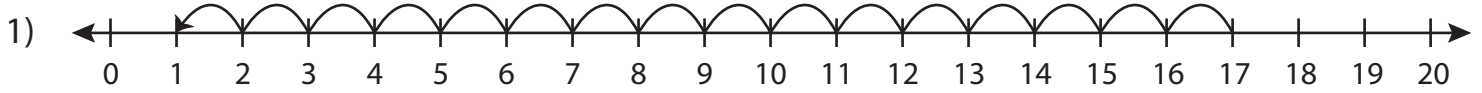


Subtraction Sentence

0-20: S1

Write the subtraction sentence that describes each model.



$$\underline{\quad} - \underline{\quad} = \underline{\quad}$$



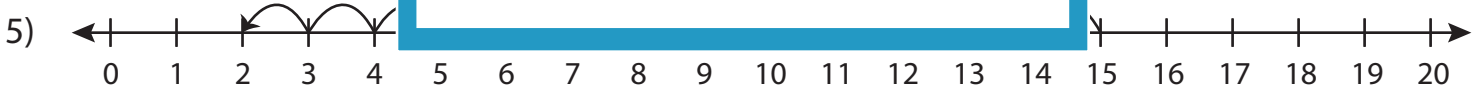
$$\underline{\quad} - \underline{\quad} = \underline{\quad}$$



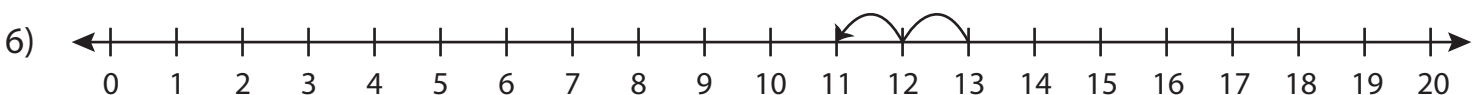
$$\underline{\quad} - \underline{\quad} = \underline{\quad}$$



$$\underline{\quad} - \underline{\quad} = \underline{\quad}$$



$$\underline{\quad} - \underline{\quad} = \underline{\quad}$$



$$\underline{\quad} - \underline{\quad} = \underline{\quad}$$

PREVIEW

Gain complete access to the largest collection of worksheets in all subjects!

Members, please log in to download this worksheet.

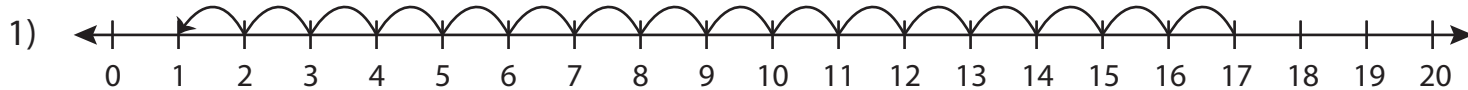
Not a member? Please sign up to gain complete access.

www.mathworksheets4kids.com

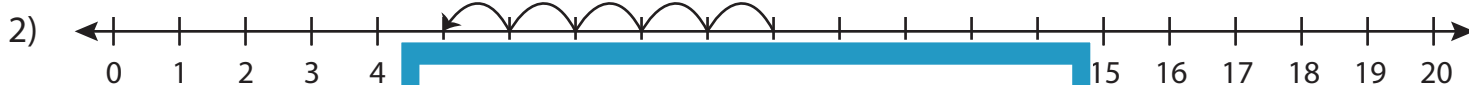
Subtraction Sentence

0-20: S1

Write the subtraction sentence that describes each model.



$$\underline{17} - \underline{16} = \underline{1}$$



$$\underline{10} - \underline{10} = \underline{0}$$



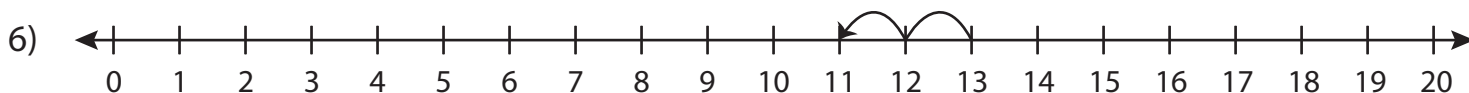
$$\underline{19} - \underline{19} = \underline{0}$$



$$\underline{6} - \underline{6} = \underline{0}$$



$$\underline{15} - \underline{13} = \underline{2}$$



$$\underline{13} - \underline{2} = \underline{11}$$

PREVIEW

Gain complete access to the largest
collection of worksheets in all subjects!

Members, please
log in to
download this
worksheet.

Not a member?
Please sign up to
gain complete
access.

www.mathworksheets4kids.com