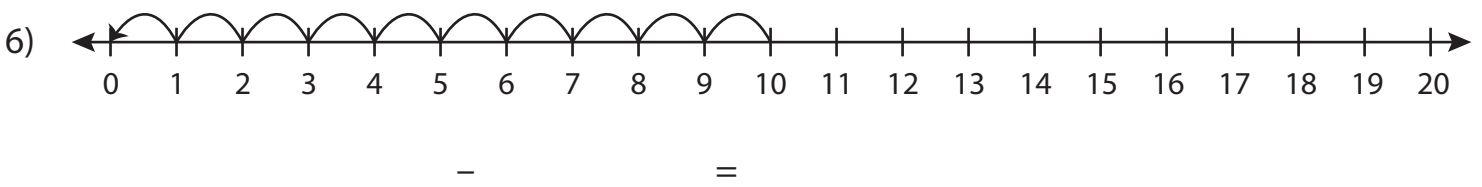
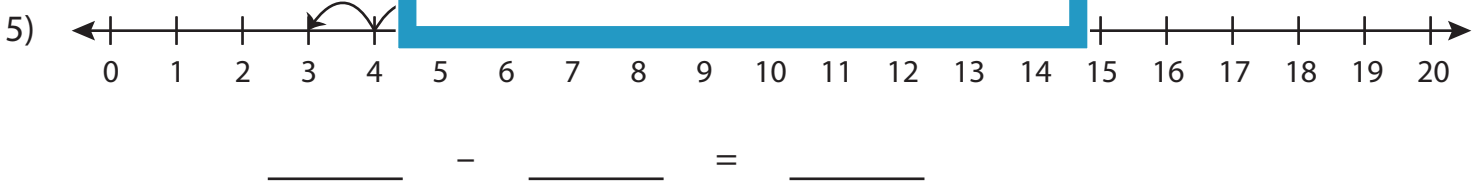
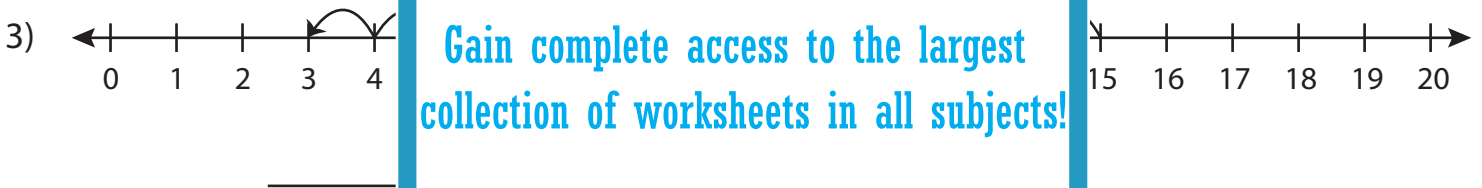
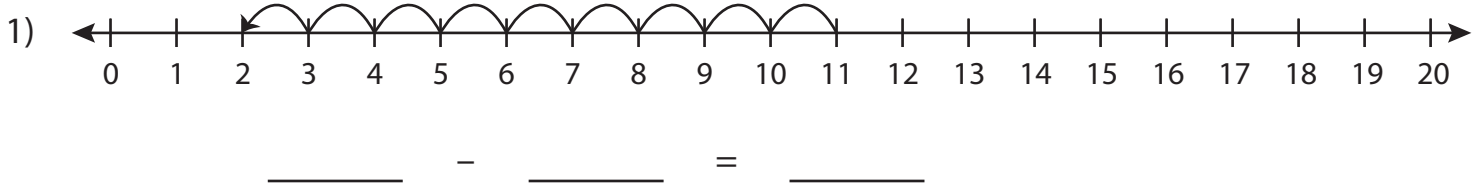


Subtraction Sentence

0-20: S2

Write the subtraction sentence that describes each model.



PREVIEW

Gain complete access to the largest
collection of worksheets in all subjects!

Members, please
log in to
download this
worksheet.

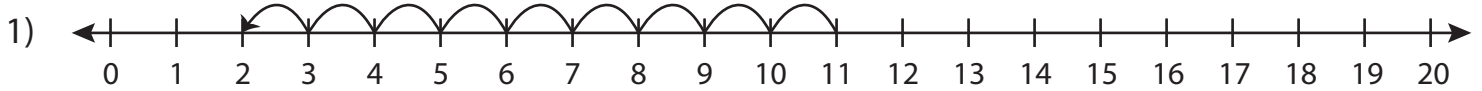
Not a member?
Please sign up to
gain complete
access.

www.mathworksheets4kids.com

Subtraction Sentence

0-20: S2

Write the subtraction sentence that describes each model.



$$\underline{11} - \underline{9} = \underline{2}$$



$$\underline{18}$$

PREVIEW

Gain complete access to the largest
collection of worksheets in all subjects!

Members, please
log in to
download this
worksheet.

Not a member?
Please sign up to
gain complete
access.

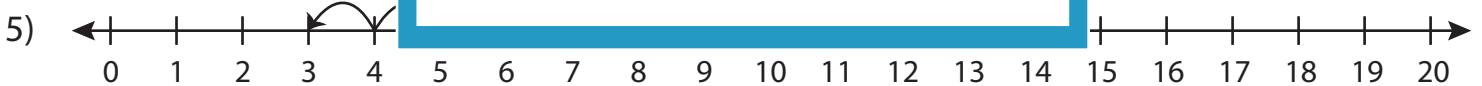
www.mathworksheets4kids.com



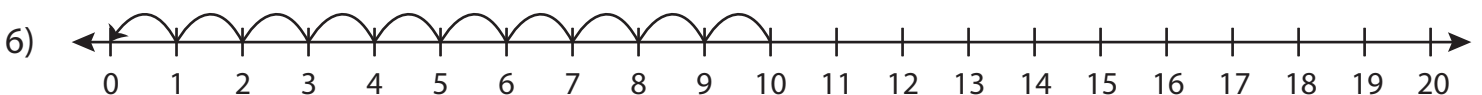
$$\underline{15}$$



$$\underline{20}$$



$$\underline{8} - \underline{5} = \underline{3}$$



$$\underline{10} - \underline{10} = \underline{0}$$