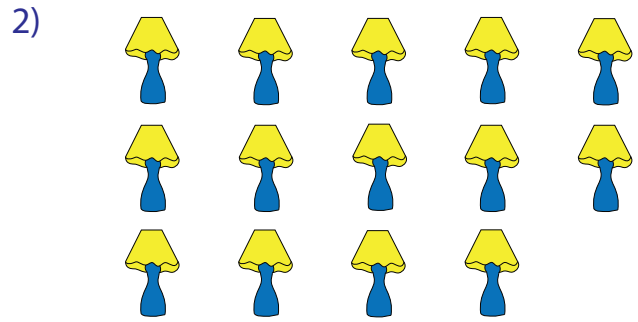


Count and Identify


Count the pictures. Classify the total as odd or even.




_____ gla
odd / even




_____ lamps
odd / even



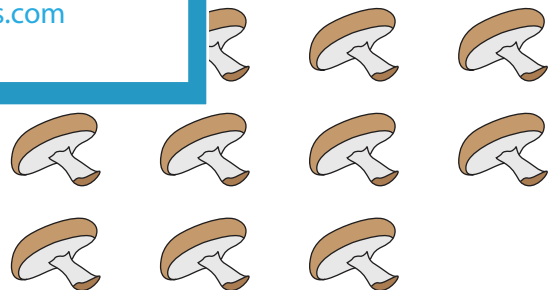
_____ ap
odd / even



_____ chillies
odd / even



_____ chocolates
odd / even



_____ mushrooms
odd / even

PREVIEW

Gain complete access to the largest collection of worksheets in all subjects!

Members, please log in to download this worksheet.

Not a member? Please sign up to gain complete access.

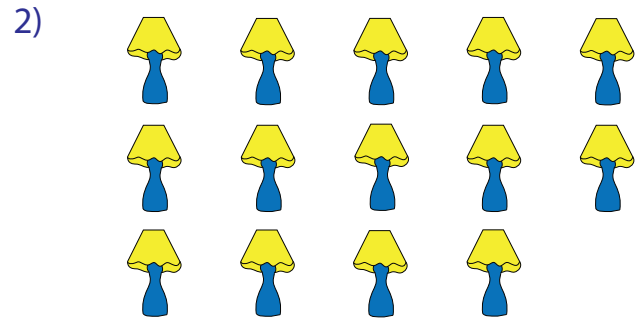
www.mathworksheets4kids.com

Count and Identify


Count the pictures. Classify the total as odd or even.




23 glasses
 odd / even




15 lamps
 odd / even



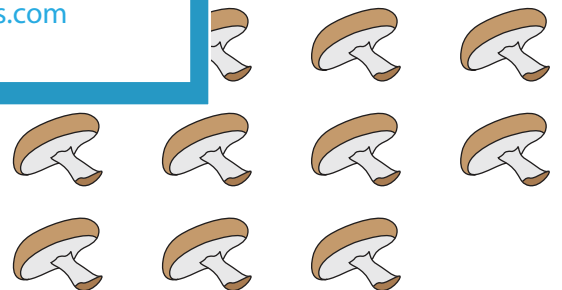
18 apples
 odd / even



4 chillies
 even / odd



21 chocolates
 odd / even



11 mushrooms
 odd / even

PREVIEW

Gain complete access to the largest collection of worksheets in all subjects!

Members, please log in to download this worksheet.

Not a member? Please sign up to gain complete access.

www.mathworksheets4kids.com