



# Count and Identify

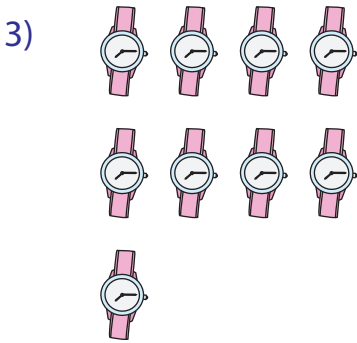
Count the pictures. Classify the total as odd or even.



\_\_\_\_\_ or  
odd / even



\_\_\_\_\_ umbrellas



\_\_\_\_\_ wa  
odd / even


## PREVIEW

Gain complete access to the largest collection of worksheets in all subjects!


Members, please log in to download this worksheet.

Not a member? Please sign up to gain complete access.

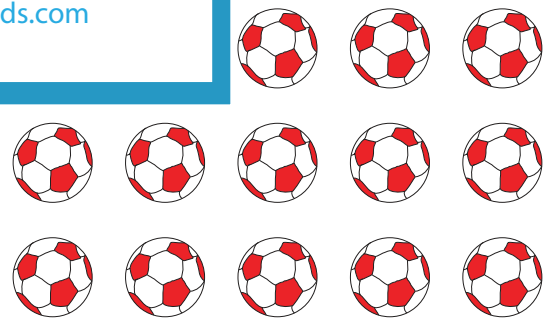
www.mathworksheets4kids.com



\_\_\_\_\_ ice creams



\_\_\_\_\_ pumpkins  
odd / even




\_\_\_\_\_ balls  
odd / even

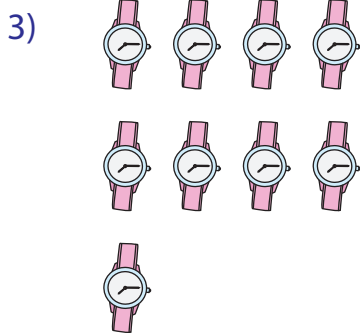
## Count and Identify

Sheet 3

Count the pictures. Classify the total as odd or even.

26 orangesodd / **even**


umbrellas

17 watches**odd** / even**PREVIEW**


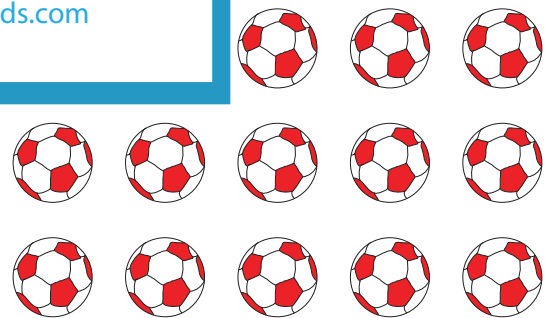
Gain complete access to the largest collection of worksheets in all subjects!

Members, please log in to download this worksheet.

Not a member? Please sign up to gain complete access.

[www.mathworksheets4kids.com](http://www.mathworksheets4kids.com)

ice creams

22 pumpkinsodd / **even**15 balls**odd** / even